

Thanks for Downloading!

[You've Got This](#)

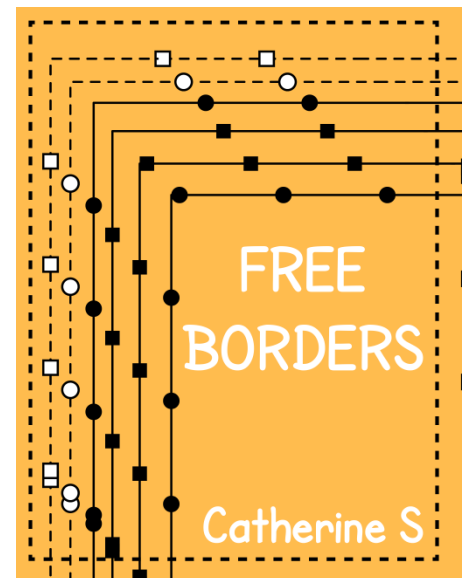


YOU MAY...

1. Print as many copies as you would like for your OWN personal use
2. Save this file on YOUR computer
3. Share on a blog, facebook page, ect as long as there is a direct link to You've Got This

DO NOT...

1. Make copies to give to your fellow teachers or friends. Please share the link with them so they can download their own personal copy.
2. Save to any file that can be accessed by anyone besides you. This includes dropbox, 4shared, facebook groups, shared drives, ect
3. E-mail just the PDF
4. Claim this printable as your own
5. Post just the PDF on your blog, facebook page, ect
6. Sell or profit in any way from the PDF

Clip Art By



Measurement Word Problems

Prep Work -

- Print off worksheets
- Provide pencils

Directions -

Children solve the problems by adding or subtracting.

Measurement Word Problems



Question	Equation	Answer
1. Gerald made a sub that was 8 inches long. Bryce made his 12 inches long. How much longer is Bryce's sub?		
2. Sharon's block tower is 20 cm. Morgan's is 2 cm less, and Ava's is 3 cm's less than Morgan's. How tall is Ava's tower?		
3. On a street, the brown house is 8 meters tall. The white house is 2 meters taller, and the brick house is 3 meters smaller than the white house. How tall is the brick house?		
4. Kellie sprinted 20 meters and Nathan sprinted 13 meters. How many meters did they sprint all together?		
5. John's driveway is 17 meters long and Ella's driveway is 12 meters long. How much longer is John's driveway?		



Measurement Word Problems

Question	Equation	Answer
1. Paul ran 98 meters and Abigail ran 79 meters. How much further did Paul run?		
2. Karen's rose bush is 65 inches tall and Hannah's bush is 53 inches tall. How tall are both of their bushes together.		
3. A wall in a room is 60 feet long. The teacher wants to line up five tables that are 10 feet long a piece. Is there enough room?		
4. The living room has a vaulted ceiling that is 108 inches tall. But the bedroom is only 84 inches tall. How much taller is the living room ceiling?		
5. Evan has 65 cm of yarn and Caden has 53 cm of yarn. How much yarn do they have altogether?		