

# Thanks for Downloading!

## You've Got This Math

### YOU MAY...

1. Print as many copies as you would like for your OWN personal use
2. Save this file on YOUR computer
3. Share on a blog, facebook page, ect as long as there is a direct link to You've Got This

### DO NOT...

1. Make copies to give to your fellow teachers or friends. Please share the link with them so they can download their own personal copy.
2. Save to any file that can be accessed by anyone besides you. This includes dropbox, 4shared, facebook groups, shared drives, ect
3. E-mail just the PDF
4. Claim this printable as your own
5. Post just the PDF on your blog, facebook page, ect
6. Sell or profit in any way from the PDF



# You May Also Like:

## Telling Time Bingo



## Telling Time Clip Cards



## Elapsed Time Word Problem

**FREE**  
Elapsed Time Word Problems  
With a Christmas Twist

**What Time Will Santa Arrive?**  
Elapsed Time Word Problem

It is 9:00PM and Santa has landed in the United States to deliver the toys. His first stop is Georgia and he spends 2 1/2 hours delivering toys to all the children and traveling to Missouri. He arrives in Missouri at 11:30.

He spends 45 minutes delivering toys and traveling to Texas. (State of your choice) at 12:15.

He spends 15 minutes to drop off all the toys and travel to California. He arrives in California at 12:30.

It takes him 1 hour and 15 minutes to how long did it take to deliver toys in California? 1:45

He is ready to leave California at 1:15AM. How long did it take him to deliver toys in California? 1:15

Sally the monster got to the doctor at a quarter till 3.  
She saw the doctor 20 minutes later. What time did she see the doctor?



It takes 15 minutes to walk to the grocery store. If Hairy left at 6:35 what time did he get there?




Jumpy got to his friends house at a quarter till two and left at 4:15. How long was he at his friends house?



Hungry started eating bugs at 6:25. He ate for 50 min. What time did he finish eating bugs?

4



Silly decided to make some slime for his friends. He started at half past nine and finished 35 minutes later. What time did he finish?

5



Smarty started his homework at 5:40 and finished at 6:25. How long did it take him to complete his homework?

6



Tidy started sweeping her floors at ten till nine. She swept for 15 minutes. What time did she finish cleaning?

7



Messy decided she had to clean her room. She worked for 55 minutes to get her room clean. If she finished at half past 9, what time did she start.

8




Soapy is washing dishes. He started at 7:30 and finished at a quarter after 8. How long did it take him to wash dishes?

9





Sleepy went to sleep at 10:5:35 and slept for 5 hours, she work up and ate some bugs for 25 minutes, and then went back to sleep for 8 hours and 20 minutes. What time did she get up?




Friendly visited three 11 neighbors. It took him five minutes to travel between each home. If he visited with each neighbor for 25 minutes and left the house at 6:45, what time did he get home?



Jogger wants to run six miles. 12 She ran her first mile in 10 min, her second mile in 12 min, her third mile in 14 min. If the pattern continues what time will she finish her 6<sup>th</sup> mile if she started at 12:45?



# My Answers



1	
2	
3	
4	
5	
6	
7	
8	
9	
10	
11	
12	

