

Thanks for Downloading!


You've Got This

YOU MAY...

1. Print as many copies as you would like for your OWN personal use
2. Save this file on YOUR computer
3. Share on a blog, facebook page, ect as long as there is a direct link to You've Got This

DO NOT...

1. Make copies to give to your fellow teachers or friends. Please share the link with them so they can download their own personal copy.
2. Save to any file that can be accessed by anyone besides you. This includes dropbox, 4shared, facebook groups, shared drives, ect
3. E-mail just the PDF
4. Claim this printable as your own
5. Post just the PDF on your blog, facebook page, ect
6. Sell or profit in any way from the PDF






Measuring Liquid Volume Word Problems

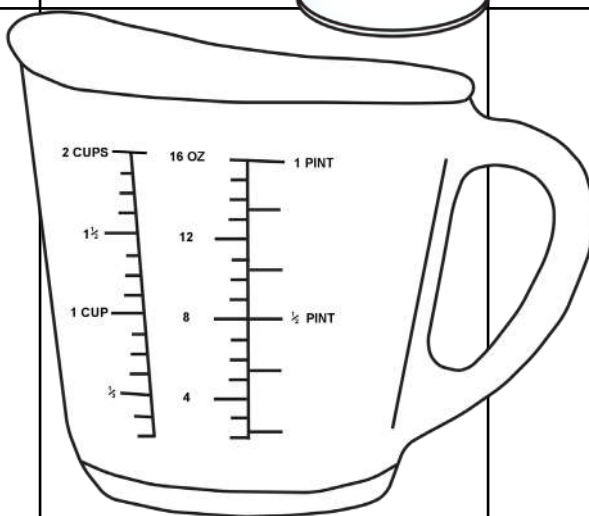
Color It

Equation

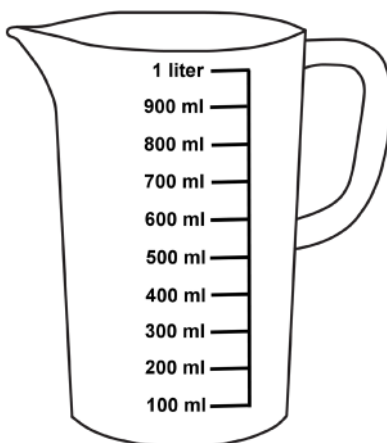
Sam poured in 59mL of liquid. How much more liquid does he need to add to get to 100mL.



Briella started with 1 cup of water. She spilled 5 oz. How many oz of water were left?



Jose had 400mL. He added 300 more. How many mL of liquid does he have?



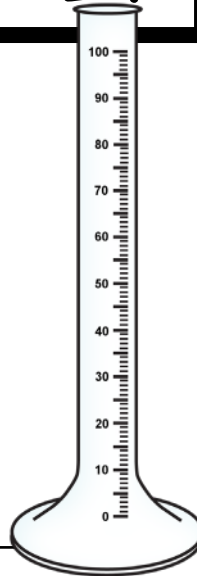


Measuring Liquid Volume Word Problems

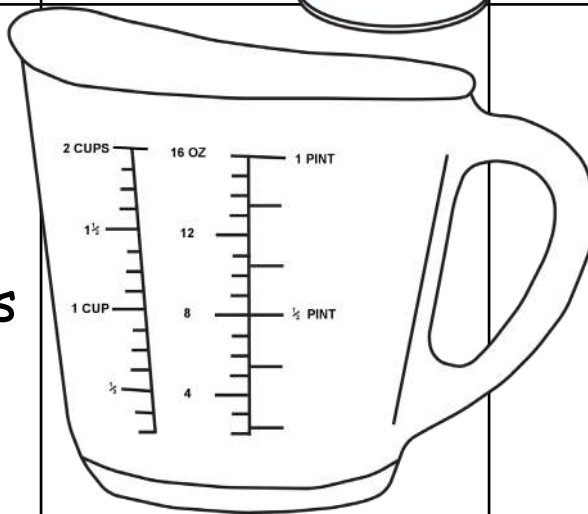
Color It

Equation

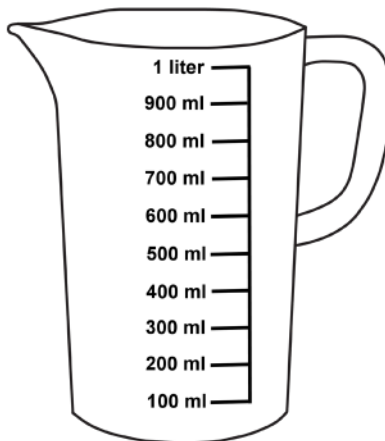
Nathaniel has 65 mL of water and 43 mL of water. Does he have enough to fill up the tube?



A recipe calls for $\frac{1}{2}$ cup of water and $\frac{1}{2}$ a pint of oil. How much liquid does the recipe call for?



The science experiment for two liquids. John added 450 mL of one liquid. When he was done he had 900 mL of liquid. How much liquid did they add in the second step?



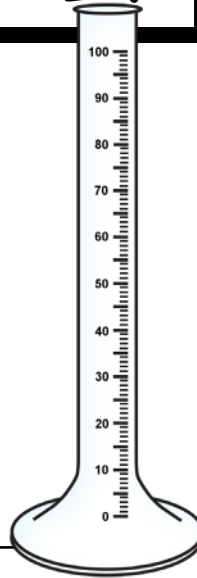


Measuring Liquid Volume Word Problems

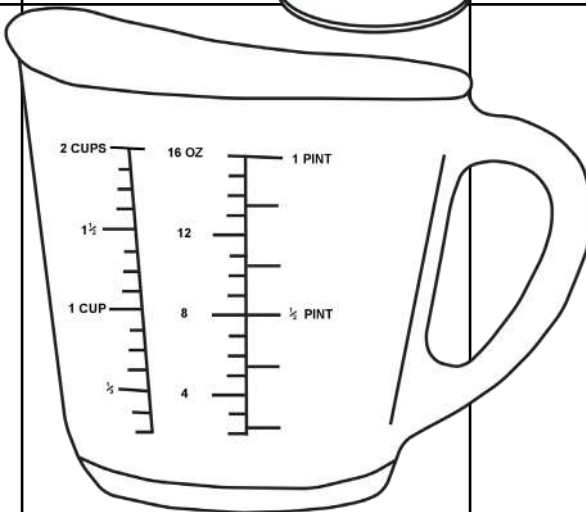
Color It

Equation

Caden needs 88mL of water. Give two different amounts of water he can use to get to 88mL.



Susan put in $\frac{1}{2}$ a cup of water and 6 oz of oil. How much more liquid is needed to reach 1 pint?



Craig needs to have 700mL of water. If he adds 350mL and then 125mL, how much more water does he need to add?

