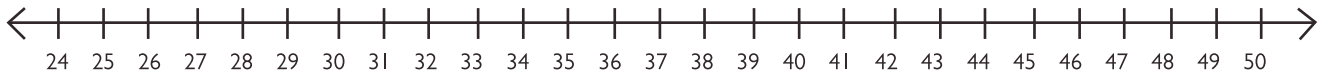


# Circle Your Answers on the Number Line

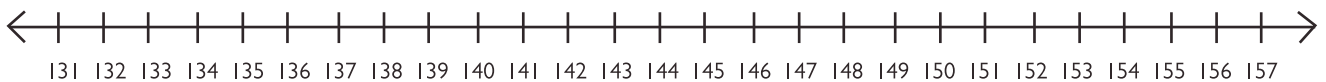
$$8 \times 6 = \underline{\hspace{2cm}}$$



$$8 \times 3 = \underline{\hspace{2cm}}$$



$$18 \times 8 = \underline{\hspace{2cm}}$$



$$8 \times 4 = \underline{\hspace{2cm}}$$



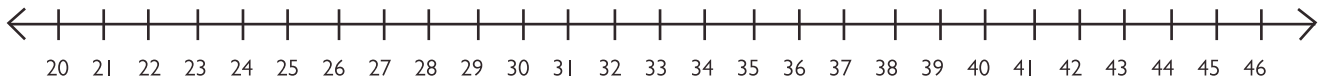
$$8 \times 9 = \underline{\hspace{2cm}}$$



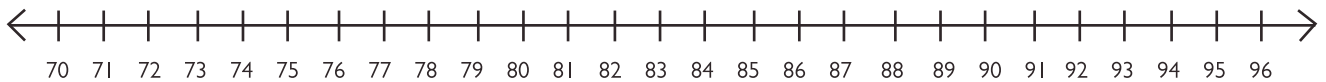
$$8 \times 0 = \underline{\hspace{2cm}}$$



$$8 \times 5 = \underline{\hspace{2cm}}$$



$$8 \times 10 = \underline{\hspace{2cm}}$$



$$8 \times 13 = \underline{\hspace{2cm}}$$



$$8 \times 7 = \underline{\hspace{2cm}}$$



$$8 \times 11 = \underline{\hspace{2cm}}$$



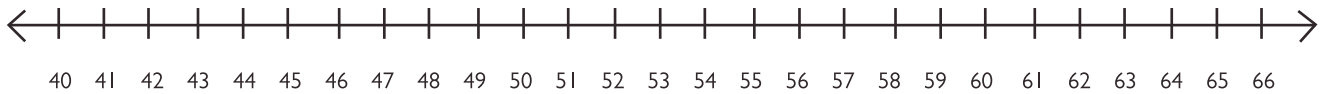
$$8 \times 2 = \underline{\hspace{2cm}}$$



$$8 \times 15 = \underline{\hspace{2cm}}$$



$$8 \times 8 = \underline{\hspace{2cm}}$$



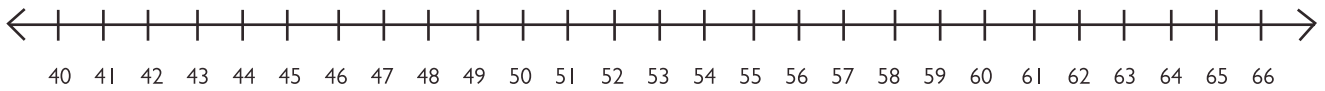
$$8 \times 12 = \underline{\hspace{2cm}}$$



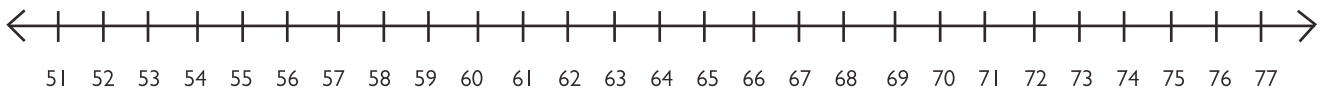
$$8 \times 10 = \underline{\hspace{2cm}}$$



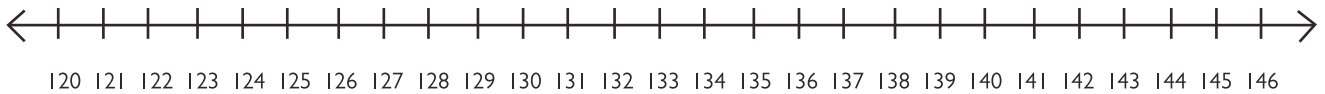
$$8 \times 6 = \underline{\hspace{2cm}}$$



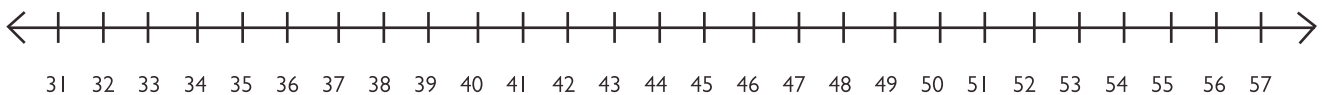
$$8 \times 9 = \underline{\hspace{2cm}}$$



$$8 \times 17 = \underline{\hspace{2cm}}$$



$$8 \times 5 = \underline{\hspace{2cm}}$$



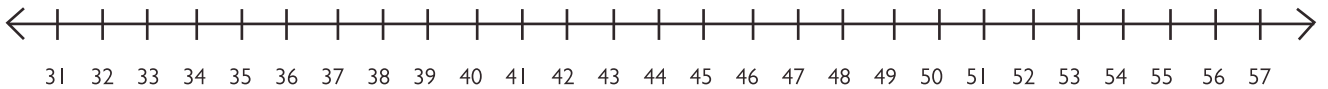
$$8 \times 7 = \underline{\hspace{2cm}}$$



$$8 \times 14 = \underline{\hspace{2cm}}$$



$$8 \times 6 = \underline{\hspace{2cm}}$$



$$8 \times 11 = \underline{\hspace{2cm}}$$



$$8 \times 16 = \underline{\hspace{2cm}}$$

