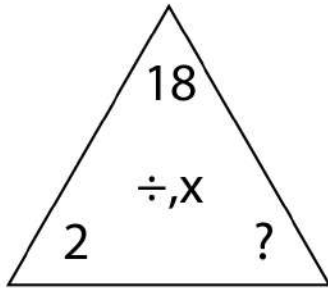


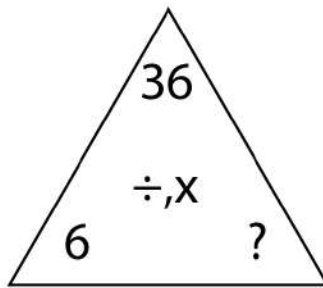
Find the Missing Family Fact Factors



$$\boxed{9} \times \boxed{2} = \boxed{18}$$

$$\boxed{2} \times \boxed{9} = \boxed{18}$$

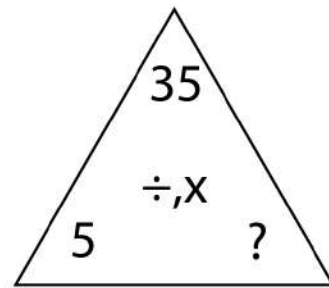
$$\boxed{18} \div \boxed{9} = \boxed{2}$$



$$\boxed{} \times \boxed{} = \boxed{}$$

$$\boxed{} \times \boxed{} = \boxed{}$$


$$\boxed{} \div \boxed{} = \boxed{}$$



$$\boxed{} \times \boxed{} = \boxed{}$$

$$\boxed{} \times \boxed{} = \boxed{}$$

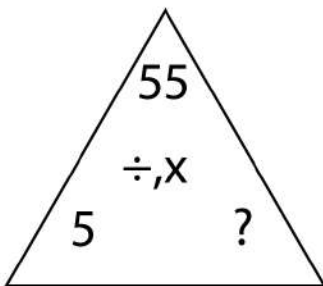
$$\boxed{} \div \boxed{} = \boxed{}$$



$$\boxed{} \times \boxed{} = \boxed{}$$

$$\boxed{} \times \boxed{} = \boxed{}$$

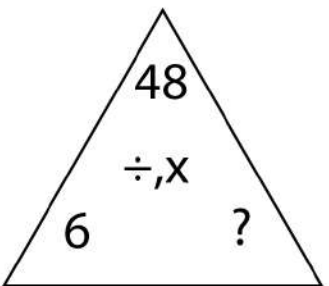
$$\boxed{} \div \boxed{} = \boxed{}$$



$$\boxed{} \times \boxed{} = \boxed{}$$

$$\boxed{} \times \boxed{} = \boxed{}$$

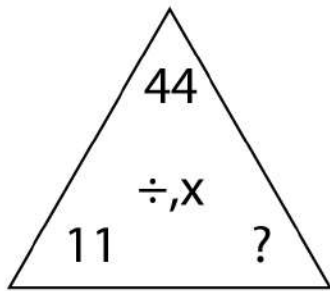
$$\boxed{} \div \boxed{} = \boxed{}$$



$$\boxed{} \times \boxed{} = \boxed{}$$

$$\boxed{} \times \boxed{} = \boxed{}$$

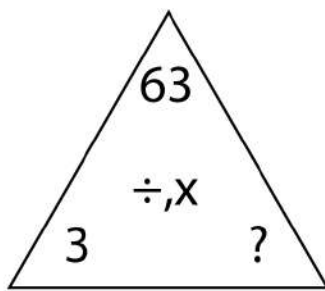
$$\boxed{} \div \boxed{} = \boxed{}$$



$$\square \times \square = \square$$

$$\square \times \square = \square$$

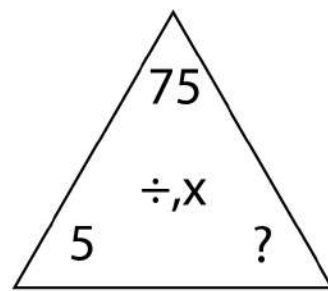
$$\square \div \square = \square$$



$$\square \times \square = \square$$

$$\square \times \square = \square$$

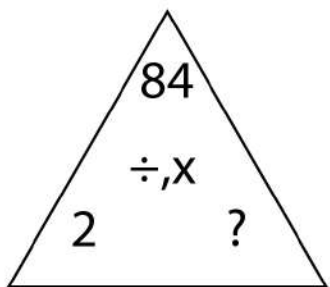
$$\square \div \square = \square$$



$$\square \times \square = \square$$

$$\square \times \square = \square$$

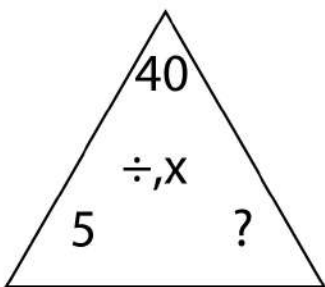
$$\square \div \square = \square$$



$$\square \times \square = \square$$

$$\square \times \square = \square$$

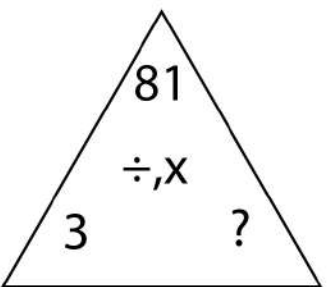
$$\square \div \square = \square$$



$$\square \times \square = \square$$

$$\square \times \square = \square$$

$$\square \div \square = \square$$



$$\square \times \square = \square$$

$$\square \times \square = \square$$

$$\square \div \square = \square$$