







Adding and Subtracting Fractions Snake Game

1	2	3		5
6		8	9	10
11	12		14	15
	17	18	19	20
21	22		24	25
26	27	28	29	

$$\frac{8}{9} + \frac{2}{6}$$

$$\frac{5}{8} - \frac{1}{4}$$

$$\frac{2}{3} + \frac{1}{4}$$

$$\frac{4}{15} - \frac{1}{5}$$

$$\frac{1}{3} + \frac{4}{12}$$

$$\frac{6}{10} - \frac{1}{5}$$