
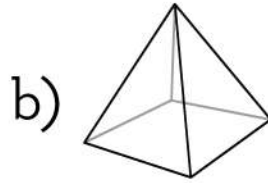


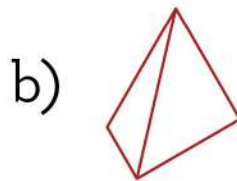
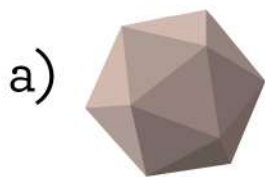


Read the below description and mark the figures with a tick (✓) sign

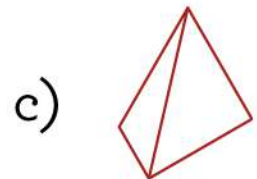
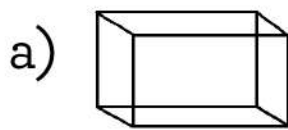
i) 6 faces, 10 edges, and 6 vertices.



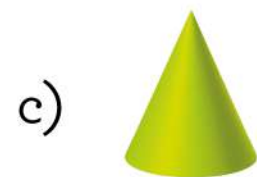
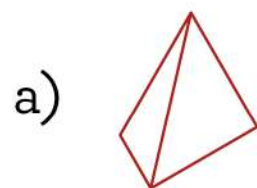
ii) 8 faces, 12 edges, and 6 vertices.



iii) 6 faces, 12 edges, and 8 vertices.



iv) 4 faces, 4 Vertices, and 6 edges.



v) No faces, No edges, and No vertices.

