

Faces, Edges, and Vertices in Real-Life Objects

i)




Face = _____
Edge = _____
Vertices = _____

ii)



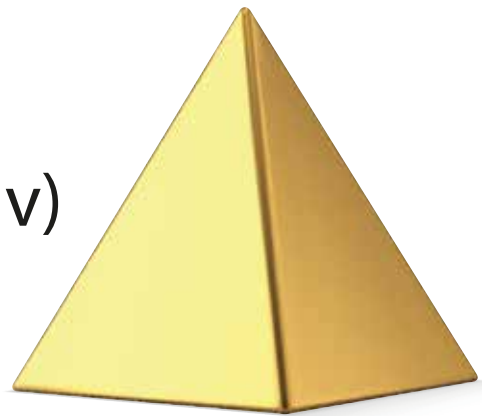
Face = _____
Edge = _____
Vertices = _____

iii)




Face = _____
Edge = _____
Vertices = _____

iv)



Face = _____
Edge = _____
Vertices = _____

v)



Face = _____
Edge = _____
Vertices = _____

vi)



Face = _____
Edge = _____
Vertices = _____