
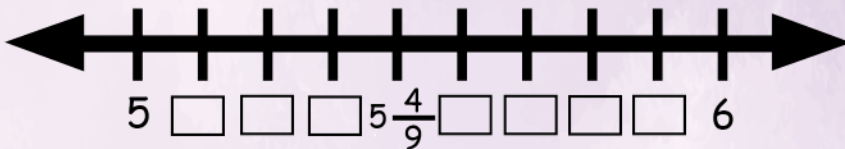


Finding mixed numbers on number line

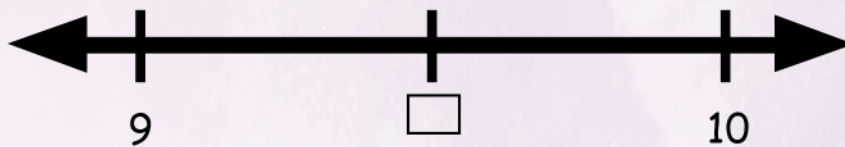
1.



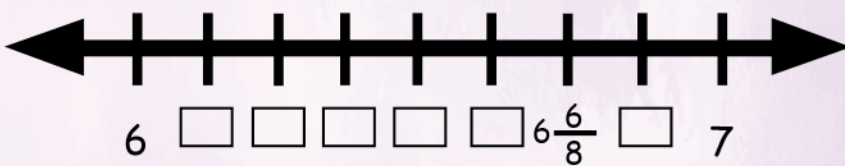
2.



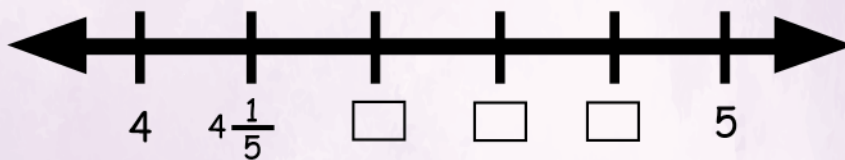
3.



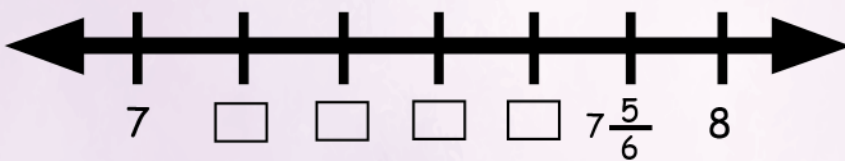
4.



5.



6.



Marked the mixed numbers in the following number lines

$A = 7\frac{5}{9}$ $B = 15\frac{2}{7}$ $C = 11\frac{4}{5}$ $D = 10\frac{1}{3}$ $E = 6\frac{7}{8}$ $F = 16\frac{3}{4}$

