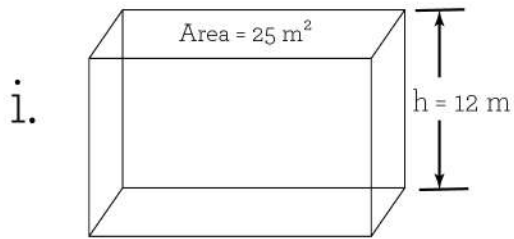
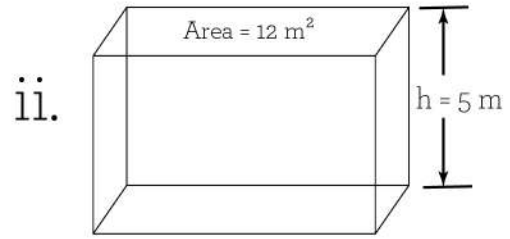


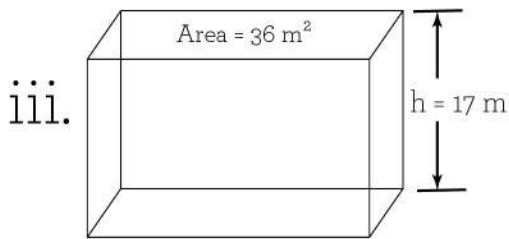
See the below figure and find the volume of these objects:



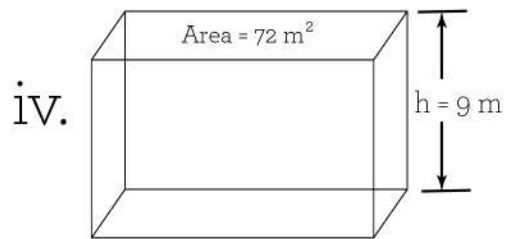
Volume: \_\_\_\_




Volume: \_\_\_\_



Volume: \_\_\_\_



Volume: \_\_\_\_



Volume: \_\_\_\_

vi. A rectangular prism has a surface of  $50 \text{ in}^2$  and its height is 15 in. What is the volume of the prism?

