


Name: _____

Count and Compare

1.



How many  ? _____

Which of these are fewer ?



How many  ? _____

2.




How many  ? _____


Which of these are larger ?



How many  ? _____


 

3.



How many  ? _____

Which of these are larger ?



How many  ? _____


 

4.



How many  ? _____

Which of these are fewer ?



How many  ? _____

Name: _____

Count and Compare

5



How many  ? _____


Which of these are larger ?



How many  ? _____

6.



How many  ? _____


Which of these are larger ?



How many  ? _____

7.



How many  ? _____

Which of these are fewer ?



How many  ? _____

8.



How many  ? _____

Which of these are fewer ?



How many  ? _____