


Name: \_\_\_\_\_


# Compare Numbers Using the Symbols- Greater than, Less than or Equal to



a. 105  140




b. 180  120




c. 109  143




d. 165  199




e. 155  148




f. 120  120



g. 187  125



h. 101  110



i. 102  102




j. 192  180




Name: \_\_\_\_\_


# Compare Numbers Using the Symbols- Greater than, Less than or Equal to




k. 190  140




l. 120  140




m. 105  115



n. 110  110



o. 180  145



p. 102  192



q. 116  116



r. 150  177



s. 102  160



t. 199  108

