

Name: _____

Worksheet for Counting Elements and Finding Odd and Even Numbers

1.




3 is an
odd / even number

2.



_____ is an
odd / even number

3.




_____ is an
odd / even number

4.




_____ is an
odd / even number

5.



_____ is an
odd / even number

6.




_____ is an
odd / even number

Name: _____


Worksheet for Counting Elements and Finding Odd and Even Numbers




12 is an
odd / even number



_____ is an
odd / even number




_____ is an
odd / even number



_____ is an
odd / even number



_____ is an
odd / even number



_____ is an
odd / even number