


Name: _____


Comparing Polygons to Find More and Lesser Sides and Corners

1.



Number of corners:


Which shape has more corners?



Number of corners:

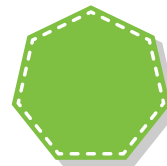
a)  b) 

2.



Number of sides:

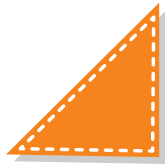
Which shape has fewer sides?



Number of sides:


a)  b) 

3.



Number of corners:


Which shape has more corners?



Number of corners:


a)  b) 

4.



Number of corners:


Which shape has fewer corners?



Number of corners:


a)  b) 

5.




Number of sides:

Which shape has more sides?




Number of sides:

a)  b) 

Name: _____


Comparing Polygons to Find More and Lesser Sides and Corners

6.



Number of corners:


Which shape has more corners?



Number of corners:


a)  b) 

7.



Number of sides:


Which shape has fewer sides?



Number of sides:


a)  b) 

8.



Number of sides:


Which shape has more sides?



Number of sides:


a)  b) 

9.



Number of corners:


Which shape has fewer corners?



Number of corners:


a)  b) 

10.



Number of sides:

Which shape has fewer sides?



Number of sides:

a)  b) 