

Identify and Count Different Value Coins



= _____



= _____



= _____



= _____



= _____



= _____



= _____




= _____

Coin Name = _____

Total Coins = _____

Total Value = _____



Identify and Count Different Value Coins



= _____



= _____



= _____



= _____



= _____



= _____



= _____




= _____

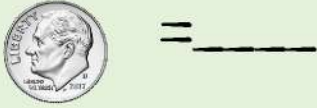
Coin Name = _____

Total Coins = _____

Total Value = _____



Identify and Count Different Value Coins



Coin Name = _____

Total Coins = _____

Total Value = _____



Identify and Count Different Value Coins



= _____



= _____



= _____



= _____



= _____



= _____



= _____



= _____

Coin Name = _____

Total Coins = _____

Total Value = _____



Identify and Count Different Value Coins



= _____



= _____



= _____



= _____



= _____



= _____



= _____



= _____

Coin Name = _____

Total Coins = _____

Total Value = _____



Identify and Count Different Value Coins



= _____



= _____



= _____



= _____



= _____



= _____



= _____



= _____

Coin Names = _____

Total Coins = _____

Total Value = _____

