

Name: _____

Counting and Matching Pictograph

Match the information in the tables with the pictographs.
Each cake has a value of two.

6
6



10
2



10
10



6
10



4
6



6
8



You've Got This Math




Math and More For Teachers and Parents

Name: _____




Match the information in the tables with the pictographs.
Each bread has a value of four.


16
12




12
8




20
12



16
16



16
20



12
12

