







Name: \_\_\_\_\_

# Cut Paste Game with Pictograph

Cut out each animal and paste it on the pictograph near the same kind.  
Based on the pictograph, answer the questions.

	<input type="checkbox"/>	<input type="checkbox"/>	<input type="checkbox"/>	<input type="checkbox"/>	<input type="checkbox"/>	<input type="checkbox"/>
	<input type="checkbox"/>	<input type="checkbox"/>	<input type="checkbox"/>	<input type="checkbox"/>	<input type="checkbox"/>	<input type="checkbox"/>
	<input type="checkbox"/>	<input type="checkbox"/>	<input type="checkbox"/>	<input type="checkbox"/>	<input type="checkbox"/>	<input type="checkbox"/>
	<input type="checkbox"/>	<input type="checkbox"/>	<input type="checkbox"/>	<input type="checkbox"/>	<input type="checkbox"/>	<input type="checkbox"/>
	<input type="checkbox"/>	<input type="checkbox"/>	<input type="checkbox"/>	<input type="checkbox"/>	<input type="checkbox"/>	<input type="checkbox"/>
	<input type="checkbox"/>	<input type="checkbox"/>	<input type="checkbox"/>	<input type="checkbox"/>	<input type="checkbox"/>	<input type="checkbox"/>

How many animals are there?

- |  |                      |  |                      |
|--|----------------------|--|----------------------|
| 1.  | <input type="text"/> | 2.  | <input type="text"/> |
| 3.  | <input type="text"/> | 4.  | <input type="text"/> |
| 5.  | <input type="text"/> | 6.  | <input type="text"/> |

7. Who has the most?



8. Who has the least?



You've Got This Math



Math and More for Teachers and Parents

Name: \_\_\_\_\_

Cut out each animal and paste it on the pictograph near the same kind.  
Based on the pictograph, answer the questions.




How many animals are there?

1.      2. 
3.      4. 
5.      6. 

7. Who has the most?



8. Who has the least?



You've Got This Math



Math and More For Teachers and Parents