


Name: \_\_\_\_\_

# Addition and Substruction with Pictograph

The following pictograph shows bakery items. Answer the questions about this pictograph.



1. How many cakes and donuts are there altogether?

2. How many more cookies do you think there are than burgers?

3. How many pizza and burger are there altogether?

4. What is the difference in the number of donuts and cakes?

5. What is the difference between the most and least items?

6. How many more pizzas exist than the number of donuts?






You've Got This Math



Math and More for Teachers and Parents

Name: \_\_\_\_\_

The following pictograph shows fruits items. Answer the questions about this pictograph.

Apple	
Cherry	
Grape	
Strawberry	
Kiwi	

1. How many kiwis and strawberries are there altogether?

2. How many more cherries do you think there are than grapes?

3. How many apples and kiwis are there altogether?

4. What is the difference in the number of strawberries and grapes?

5. What is the difference between the most and least items?

6. How many more strawberries exist than the number of apples?

You've Got This Math



Maths and More For Teachers and Parents