




Name: _____

Counting Day Activity Time with Pictograph

Activity	Hours	 = 1 hour
Sleeping	       	
Exercising	 	
Eating	   	
Studying	     	
Playing	   	

Answer the following questions.

How much time does an activity require?

1. Sleeping

2. Exercising

3. Eating

4. Studying

5. Playing

6. Which activity takes the most time?








7. Which activity takes the least time?

You've Got This Math



Math and More for Teachers and Parents

Name: _____

Activity	Hours	 = 2 hours
Sleeping	    	
Dancing		
Eating	 	
Studying	  	
Playing	 	

Answer the following questions.

How much time does an activity require?

1. Sleeping

2. Dancing

3. Eating

4. Studying

5. Playing

6. Which activity takes the most time?

7. Which activity takes the least time?