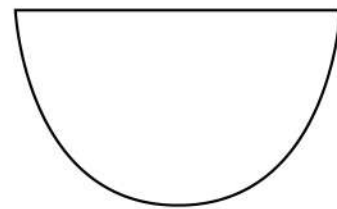
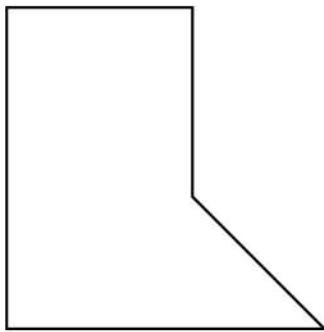
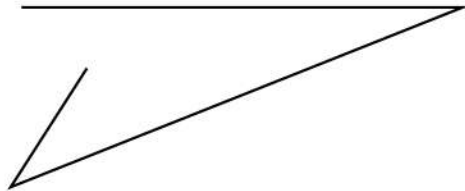
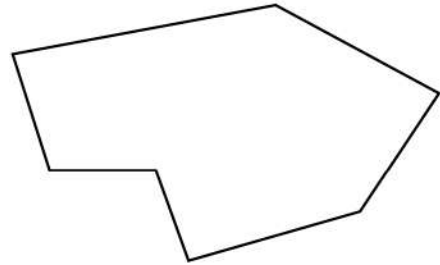
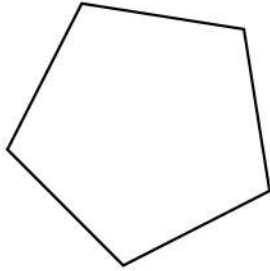


Name: _____

Classify Polygons of Different Shapes

Classify the below shapes of different polygons. If a shape is not a polygon then write it non polygon.



Name: _____

Classify Polygons of Different Shapes

Classify the below shapes of different polygons. If a shape is not a polygon then write it non polygon.

