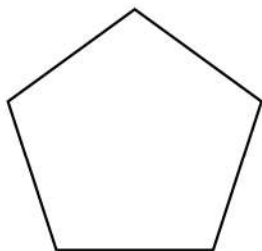


Name: _____

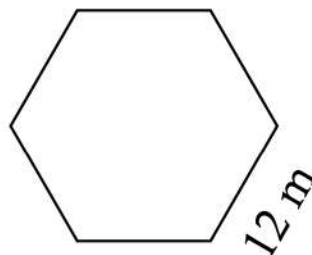
Perimeter of Polygons

Find the perimeter of the below polygons. Use calculator if needed



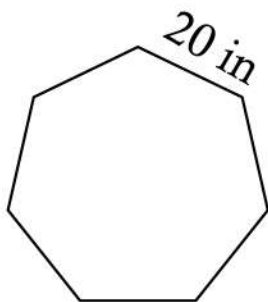
8 yards

Perimeter= _____



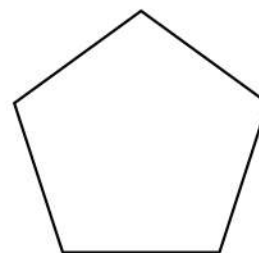
12 m

Perimeter= _____



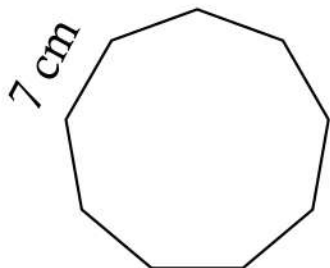
20 in

Perimeter= _____



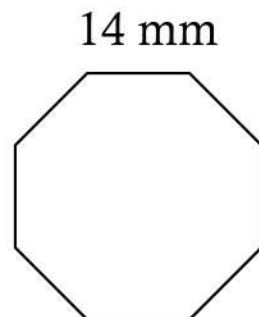
4 in

Perimeter= _____



7 cm

Perimeter= _____



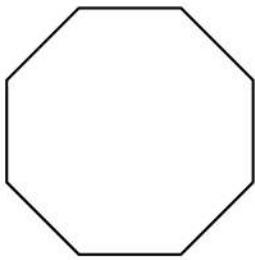
14 mm

Perimeter= _____

Name: _____

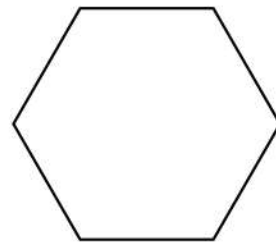
Perimeter of Polygons

Find the perimeter of the below polygons. Use calculator if needed




6 m

Perimeter= _____



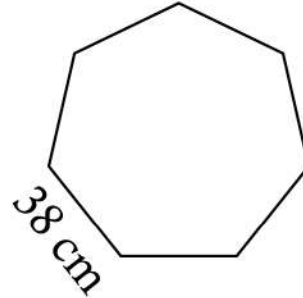
25 in

Perimeter= _____

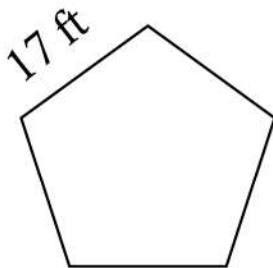


12 mm

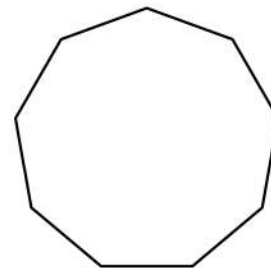
Perimeter= _____



Perimeter= _____



Perimeter= _____



7 yards

Perimeter= _____