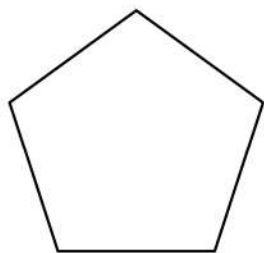


Name: _____

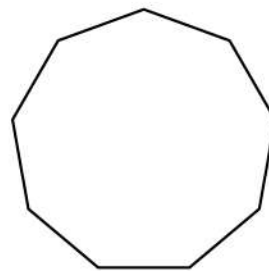
Finding Exterior Angles

Figure out the number of sides and calculate the interior angles of the polygons



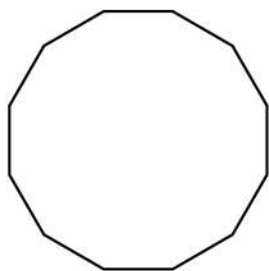
Number of sides = _____

Exterior angles = _____



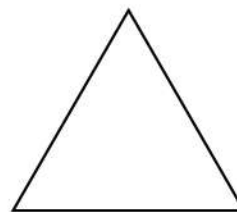
Number of sides = _____

Exterior angles = _____



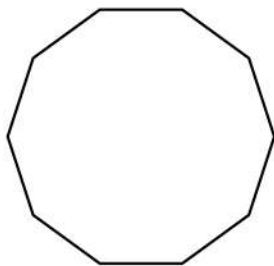
Number of sides = _____

Exterior angles = _____



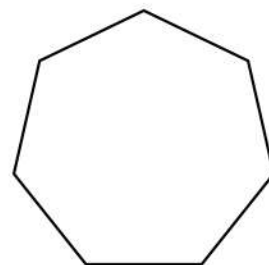
Number of sides = _____

Exterior angles = _____



Number of sides = _____

Exterior angles = _____



Number of sides = _____

Exterior angles = _____