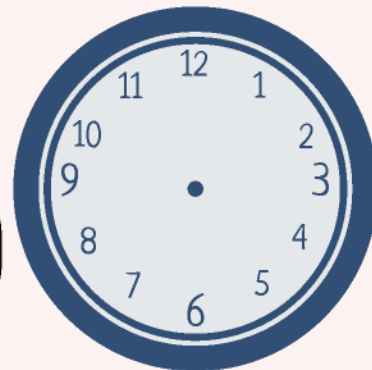


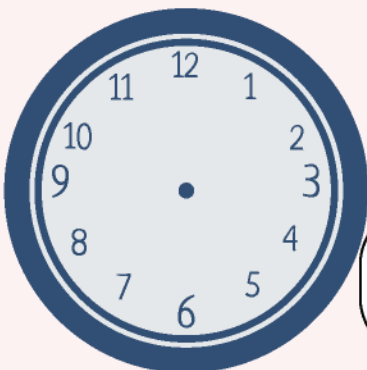
Guess Correct time from Time Riddles

1. I am the time when the big hand is on 3 and the small hand is just past 8. The seconds hand is at 45 seconds. What time am I?

Answer:



2. I am the time when the big hand is on 9 and the small hand is on 5. The seconds hand is at 20 seconds. What time am I?



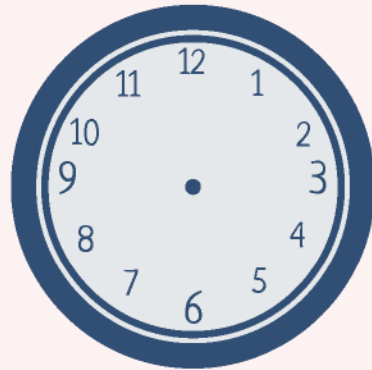
Answer:




Guess Correct time from Time Riddles

3. I am the time when the big hand is on 2 and the small hand is on 7. The seconds hand is at 30 seconds. What time am I?

Answer:



2. I am the time when the big hand is on 10 and the small hand is on 4. The seconds hand is at 15 seconds. What time am I?



Answer:

