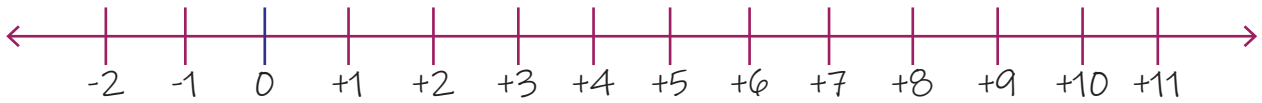
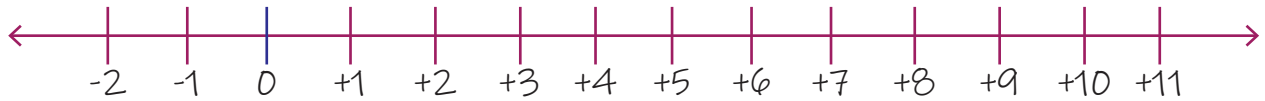


Adding Two Positive Numbers with a Number Line

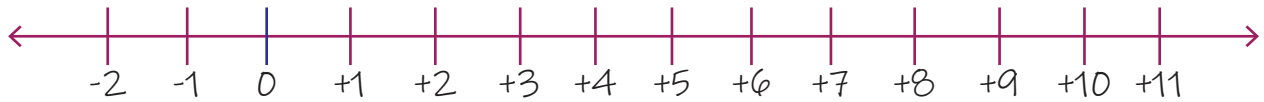
1. $3+8=?$



2. $3+6=?$



3. $2+8=?$



4. $3+5=?$



5. $7+3=?$



6. $6+4=?$



7. $5+6=?$



8. $5+4=?$



9. $13+8=?$



10. $13+2=?$



11. $12+8=?$



12. $3+15=?$



13. $17+3=?$



14. $16+4=?$



15. $15+6=?$



16. $18+3=?$

