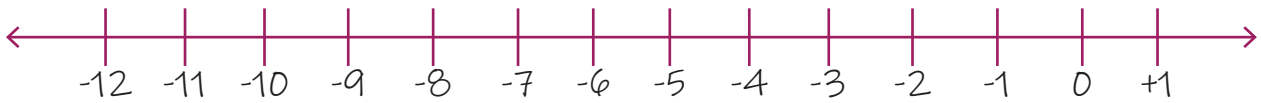
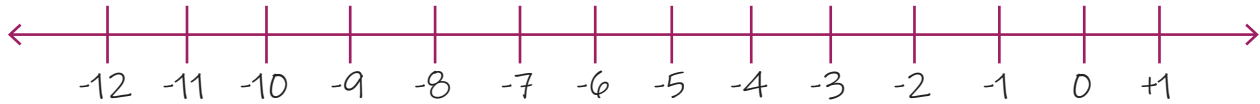


Adding Two Negative Numbers Using Number Lines

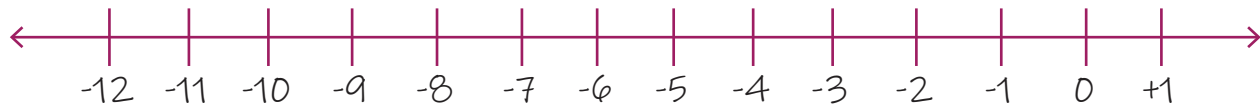
1. $(-3)+(-8)=?$



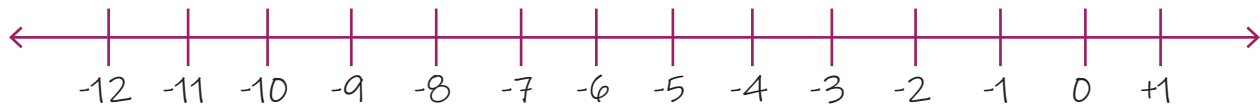
2. $(-3)+(-2)=?$



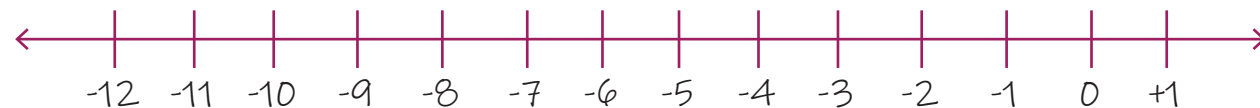
3. $(-2)+(-5)=?$



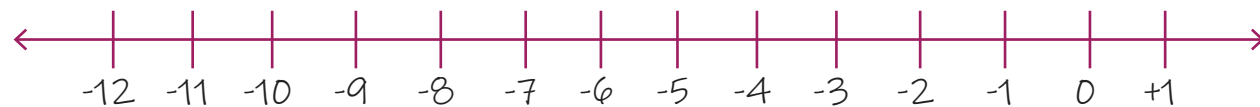
4. $(-3)+(-3)=?$



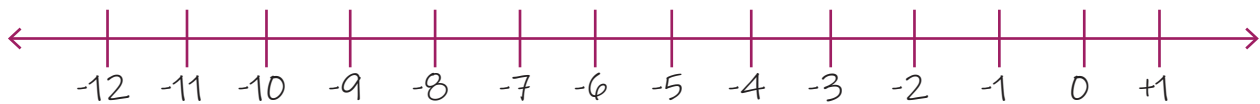
5. $(-4)+(-5)=?$



6. $(-6)+(-2)=?$



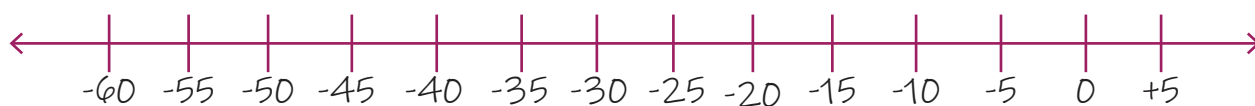
7. $(-5)+(-5)=?$



8. $(-3)+(-4)=?$



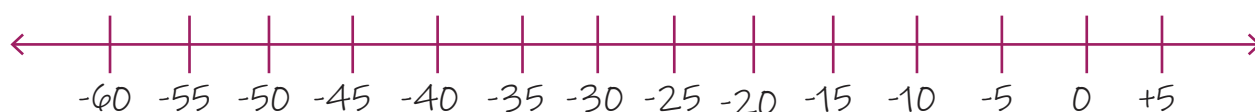
$$9. (-15) + (-10) = ?$$



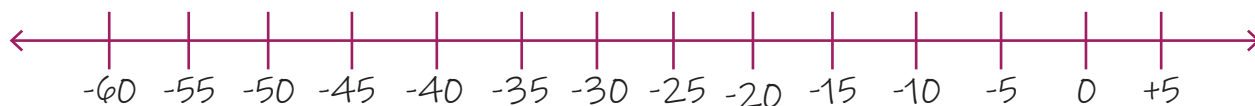
$$10. (-25) + (-5) = ?$$



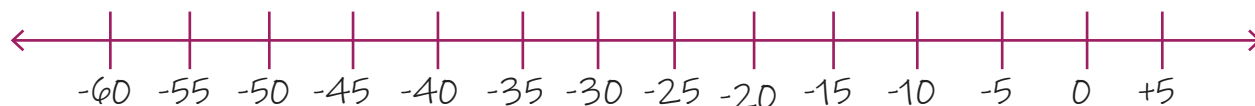
$$11. (-15) + (-25) = ?$$



$$12. (-5) + (-25) = ?$$



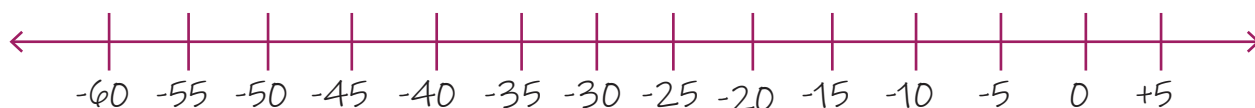
$$13. (-10) + (-5) = ?$$



$$14. (-20) + (-10) = ?$$



$$15. (-15) + (-20) = ?$$



$$16. (-45) + (-10) = ?$$

