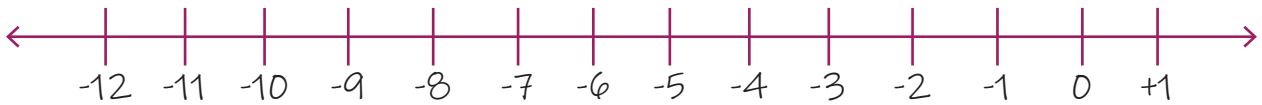
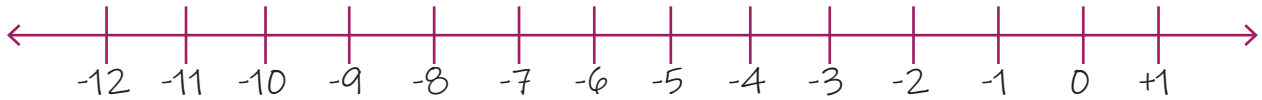


Adding Two Negative Numbers Using Number Lines

01. $(-10)+(-2)=?$



02. $(-5)+(-6)=?$



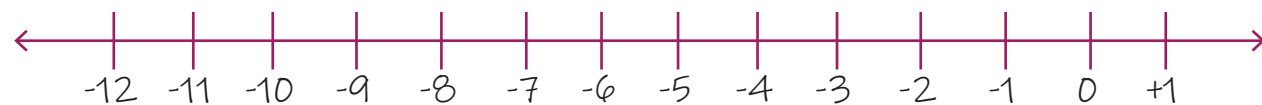
03. $(-9)+(-2)=?$



04. $(-8)+(-1)=?$



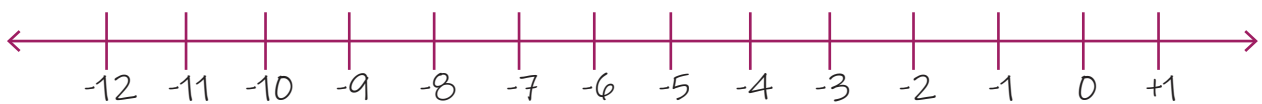
05. $(-4)+(-8)=?$



06. $(-5)+(-6)=?$



07. $(-2)+(-7)=?$



08. $(-5)+(-2)=?$

