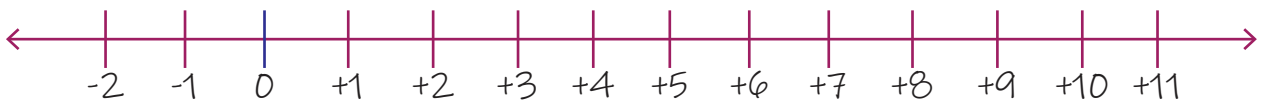
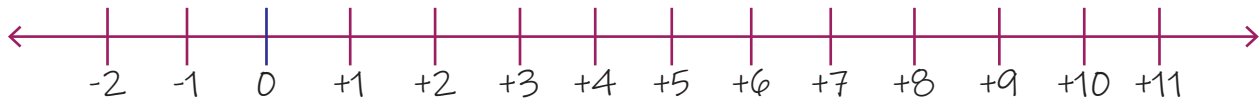


Subtracting Numbers Using Number Lines

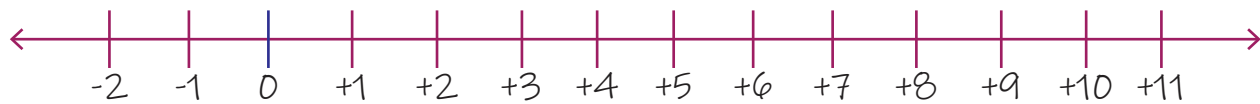
1. $8-3=?$



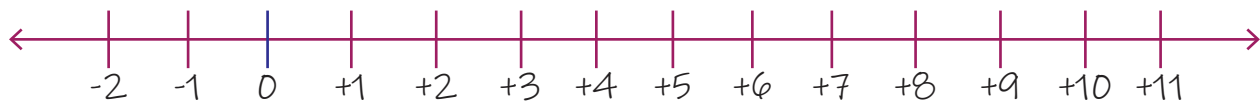
2. $6-3=?$



3. $8-2=?$



4. $5-3=?$



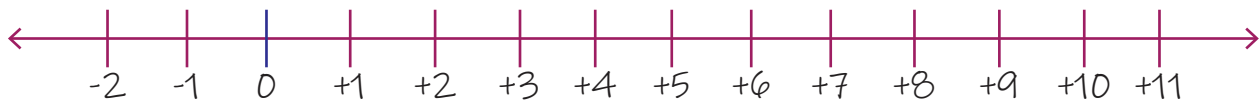
5. $7-3=?$



6. $6-4=?$



7. $5-1=?$



8. $5-4=?$



9. $23 - 8 = ?$



10. $13 - 2 = ?$



11. $22 - 8 = ?$



12. $15 - 3 = ?$



13. $17 - 3 = ?$



14. $16 - 4 = ?$



15. $15 - 4 = ?$



16. $18 - 3 = ?$

