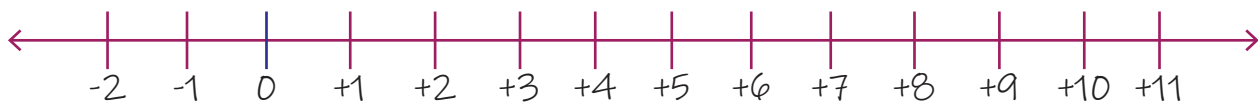


Adding 3 Single Digit Numbers on a Number Line

1. $3+7+1=?$



2. $3+6+2=?$



3. $2+6+2=?$



4. $3+5+3=?$



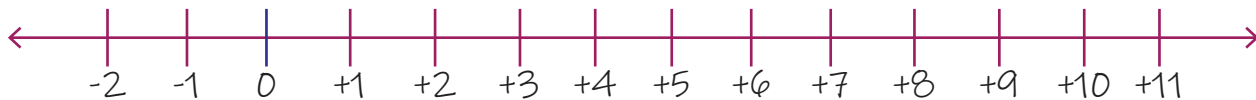
5. $2+3+3=?$



6. $6+2+2=?$



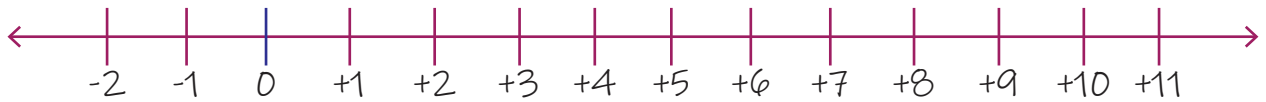
7. $5+6+0=?$



8. $5+4+1=?$



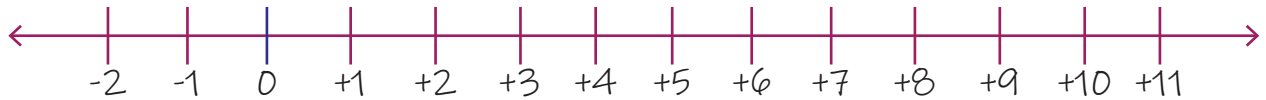
9. $3+6+1=?$



10. $3+1+2=?$



11. $1+6+2=?$



12. $3+0+3=?$



13. $4+3+3=?$



14. $8+1+2=?$



15. $4+2+3=?$



16. $2+4+1=?$

