



Read below & choose the best Answer :

Matching Problem



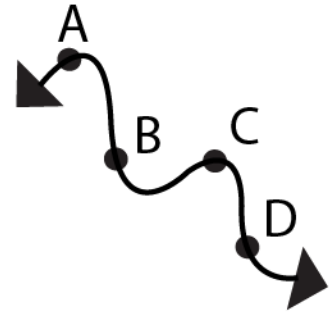
Line 

Rays 

Line Segments 

Matching Lines, Rays, and Line Segments with Real Life Objects:

i) Line segments



ii) Lines



iii) Perpendicular Line



iv) Curved Line



v) Rays



vi) Parallel Line

