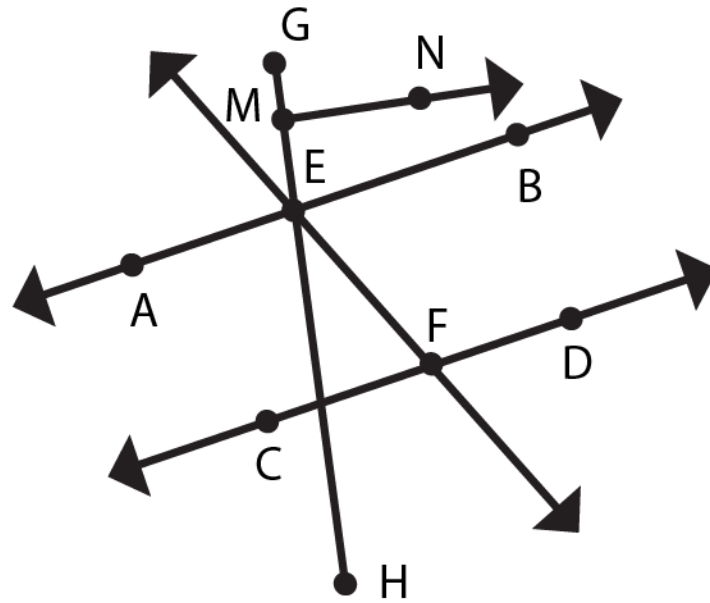


Line, Rays, and Line Segments Word Problems:



(i) Which two lines are parallel ?



(ii) How many line segments are there in the above figure?



(iii) Name any four rays?



(iv) Identify and write two intersecting lines?



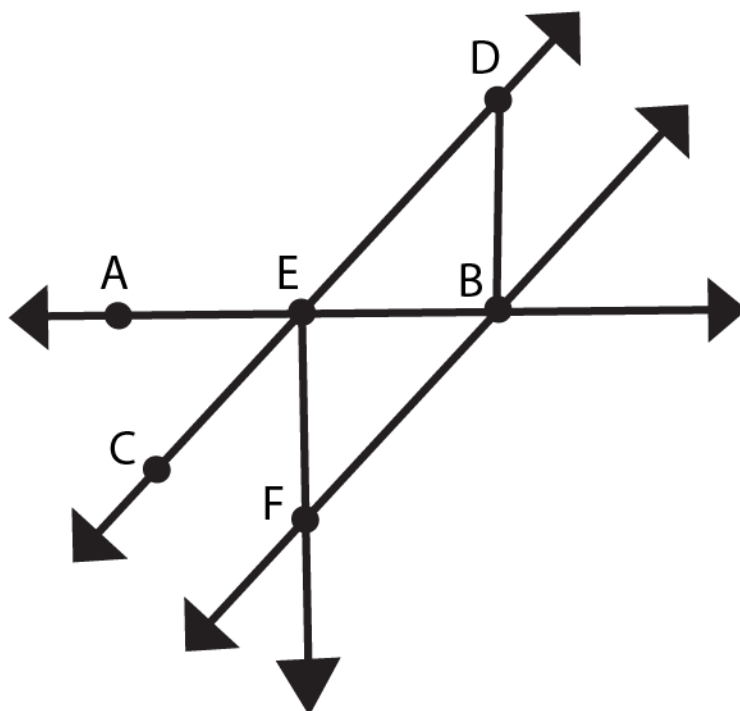
(v) Line CD intersects line _____



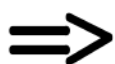
(vi) Name a perpendicular line _____



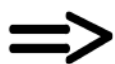
Line, Rays, and Line Segments Word Problems:



1) which is the longest line segment?



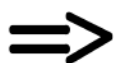
2) How many rays are shown in the above figure?



3) Define lines? Name of the lines from the above figure.



4) Two parallel Lines _____



5) Two perpendicular Lines _____



6) Line CD intersects line _____

