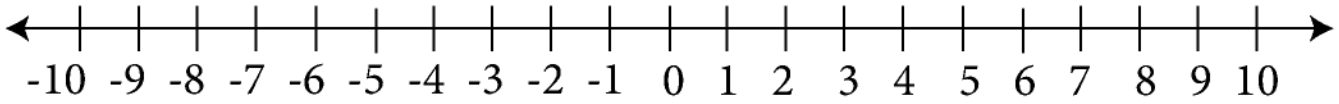


Worksheet of Plotting Negative Integers on a Number Line

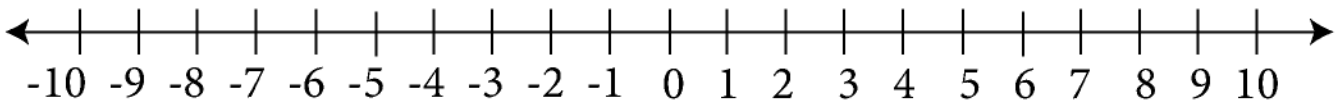
1. Compare and order following numbers :

$-3, -6, -8, -9$



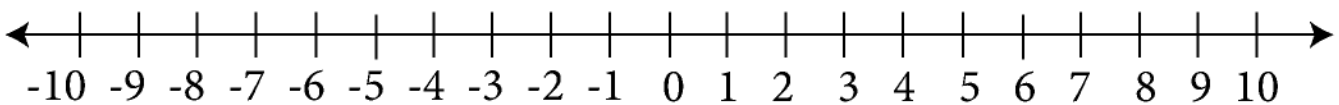
2. Compare and order following numbers :

$-2, -5, -7, -8$



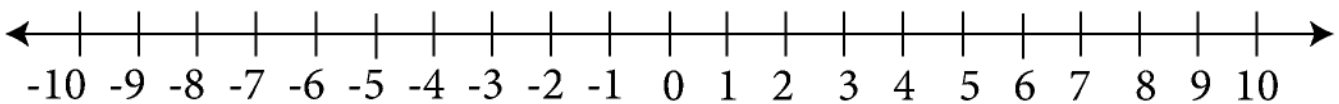
3. Compare and order following numbers :

$-1, -5, -6, -9$



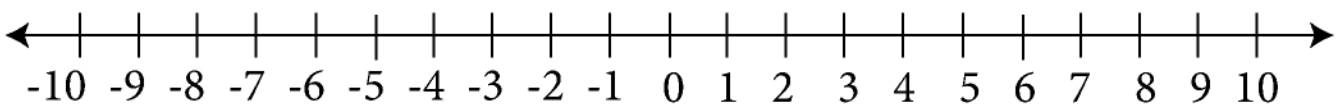
4. Compare and order following numbers :

$-5, -6, -8, -9$



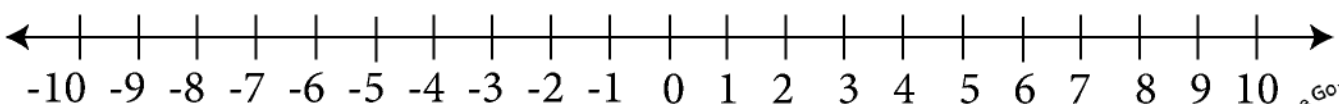
5. Compare and order following numbers :

$-4, -7, -5, -6$



6. Compare and order following numbers :

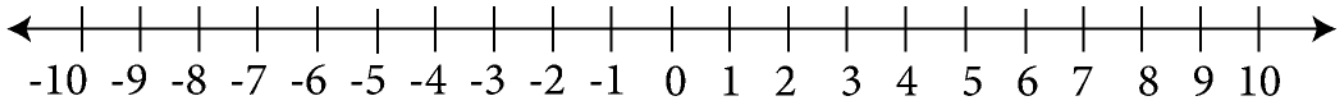
$-1, -2, -8, -4$



Worksheet of Plotting Negative Integers on a Number Line

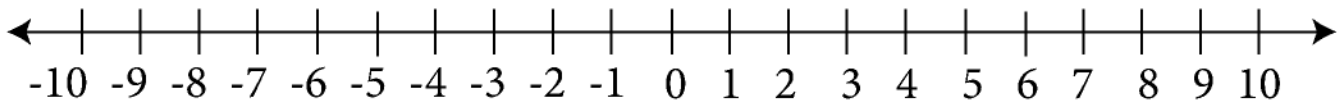
1. Compare and order following numbers :

$-8, -6, -4, -9$



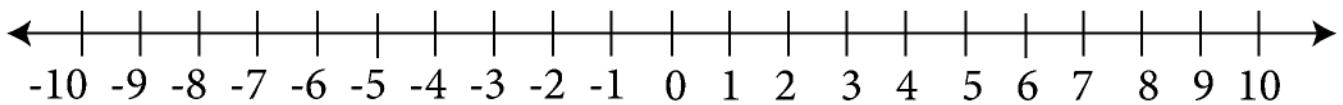
2. Compare and order following numbers :

$-9, -5, -7, -8$



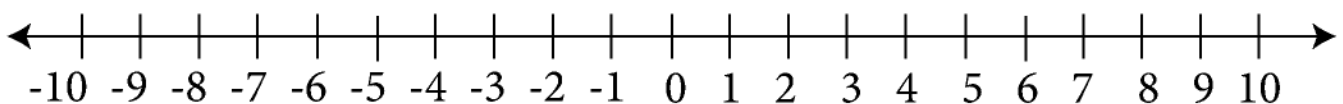
3. Compare and order following numbers :

$-6, -5, -1, -9$



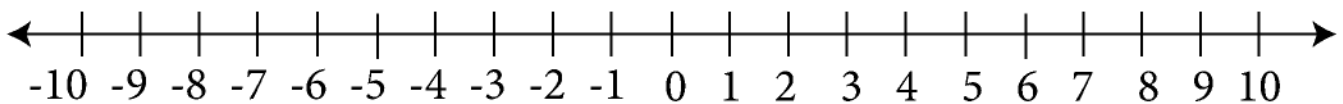
4. Compare and order following numbers :

$-4, -6, -8, -9$



5. Compare and order following numbers :

$-4, -1, -5, -6$



6. Compare and order following numbers :

$-1, -7, -9, -4$

