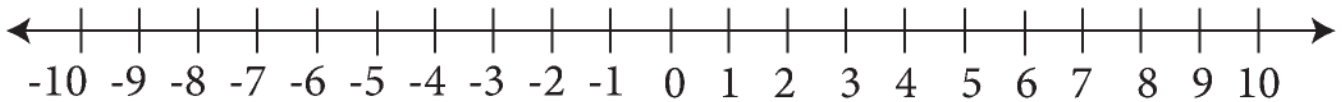


Worksheet of Addition of Negative Numbers on a Number Line

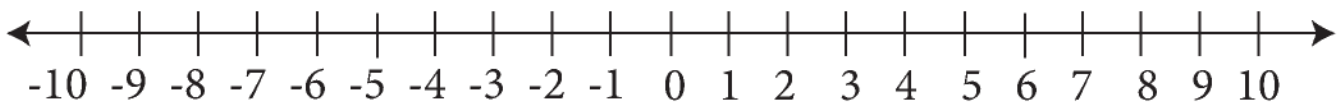
1. Solve the following problems and plot the number on number line.

Add $(-3)+(-4)=$ ___



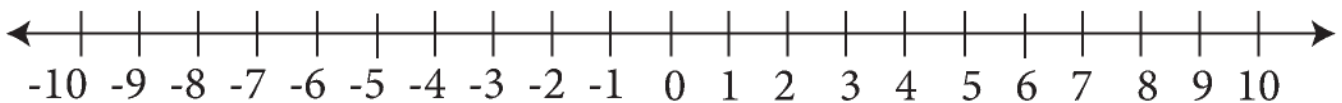
2. Solve the following problems and plot the number on number line.

Add $(-3)+(-6)=$ ___



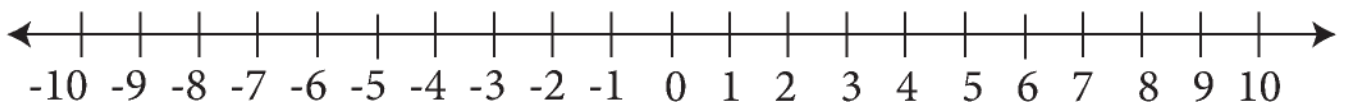
3. Solve the following problems and plot the number on number line.

Add $(-5)+(-3)=$ ___



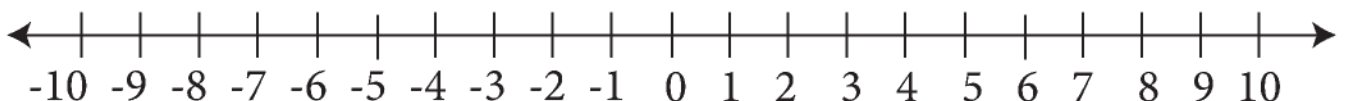
4. Solve the following problems and plot the number on number line.

Add $(-7)+(-2)=$ ___



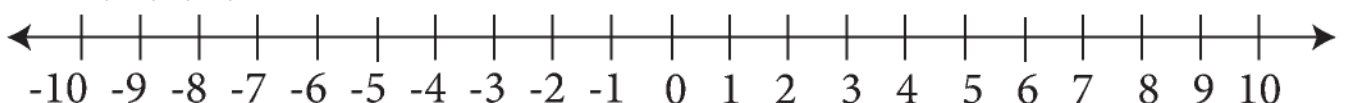
5. Solve the following problems and plot the number on number line.

Add $(-8)+(-4)=$ ___



6. Solve the following problems and plot the number on number line.

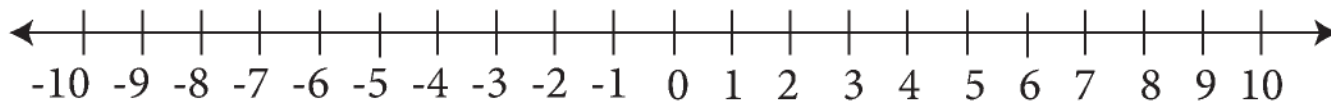
Add $(-5)+(-3)=$ ___



Worksheet of Addition of Negative Numbers on a Number Line

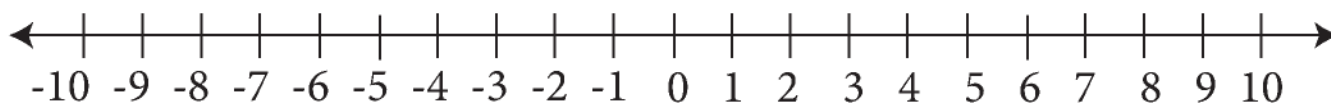
1. Solve the following problems and plot the number on number line.

Add $(-6)+(-4)=$ ___



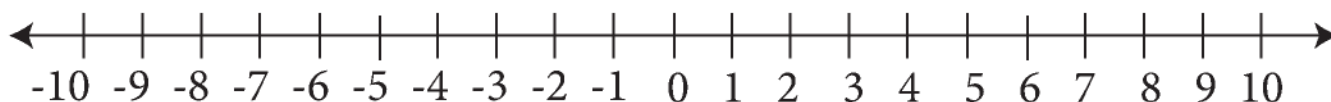
2. Solve the following problems and plot the number on number line.

Add $(-2)+(-5)=$ ___



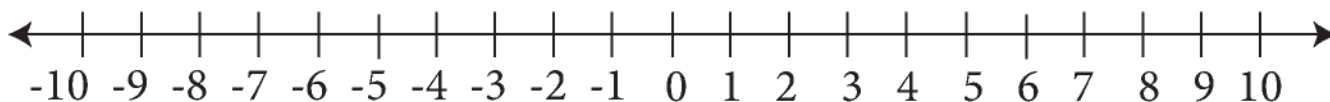
3. Solve the following problems and plot the number on number line.

Add $(-4)+(-9)=$ ___



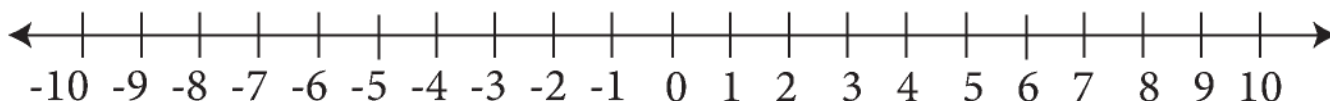
4. Solve the following problems and plot the number on number line.

Add $(-2)+(-2)=$ ___



5. Solve the following problems and plot the number on number line.

Add $(-2)+(-7)=$ ___



6. Solve the following problems and plot the number on number line.

Add $(-5)+(-9)=$ ___

