

# Find the Greater Number

1.   

2.   

3.   

4.   

5.   

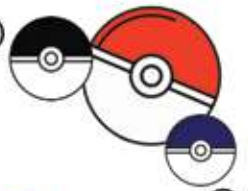
6.   

7.   

8.   

9.   



10.   



1.   



2.   

3.     




4.   

5.   

6.     


7.   

8.     


9.     
 

10.     