





Do the Addition and Subtraction







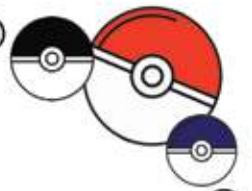
1.  +  =

2.  +  -  =

3.  -  +  =

4.  +  +  -  =

5.  +  -  +  =



$$1. \text{Poliwhirl} - \text{Poliwhirl} = \square$$

$$2. \text{Poliwhirl} + \text{Jigglypuff} + \text{Jigglypuff} = \square$$

$$3. \text{Poliwhirl} + \text{Poliwhirl} + \text{Poliwhirl} - \text{Poliwhirl} = \square$$

$$4. \text{Poliwhirl} + \text{Poliwhirl} - \text{Poliwhirl} - \text{Jigglypuff} = \square$$

$$5. \text{Poliwhirl} + \text{Poliwhirl} - \text{Jigglypuff} + \text{Poliwhirl} - \text{Jigglypuff} = \square$$