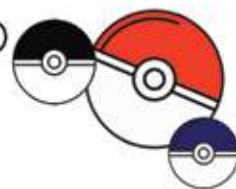




# Solve the Riddle







1.  x  = 25

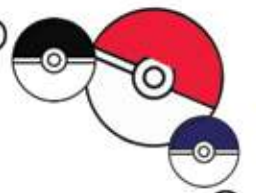
2.  +  = 12

3.  -  +  = 16

4.  +  -  = 22



5. ( x ) +  -  = ?









1.  ÷  = 8

2.  ×  = 48

3.  +  -  = 7

4.  +  +  = 24

5. ( × ) +  -  = ?

