










Count Mixed Coins without Dollar Bills

 <p>How much? ____</p>	 <p>How much? ____</p>	 <p>How much? ____</p>
 <p>How much? ____</p>	 <p>How much? ____</p>	 <p>How much? ____</p>
 <p>How much? ____</p>	 <p>How much? ____</p>	 <p>How much? ____</p>

Count Mixed Coins Dollar Bills up to \$4



How much? _____



How much? _____



How much? _____



How much? _____



How much? _____



How much? _____



How much? _____










How much? _____



How much? _____

Name : _____

Count Mixed Coins with Dollar Bills up to \$12

 <p>How much? _____</p>	 <p>How much? _____</p>	 <p>How much? _____</p>
 <p>How much? _____</p>	 <p>How much? _____</p>	 <p>How much? _____</p>
 <p>How much? _____</p>	 <p>How much? _____</p>	 <p>How much? _____</p>