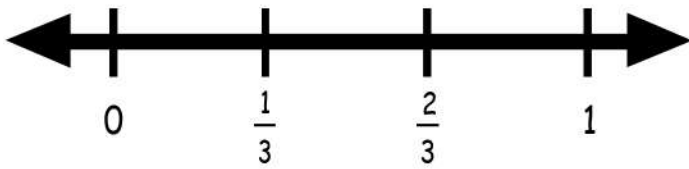


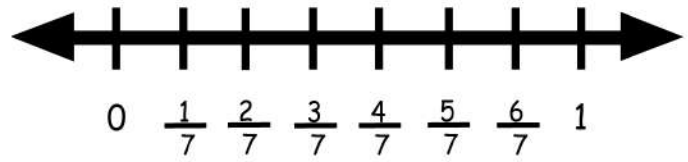
Name : _____

Label Number Lines with Consequent Equivalent Fractions

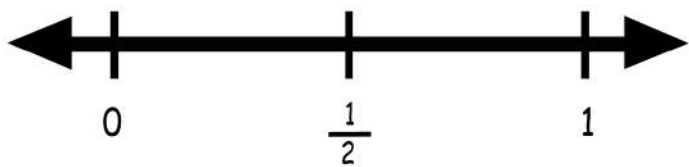
1. $\frac{1}{3} = ?$



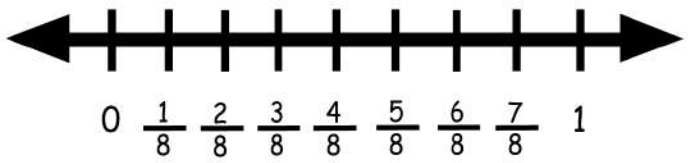
5. $\frac{3}{7} = ?$



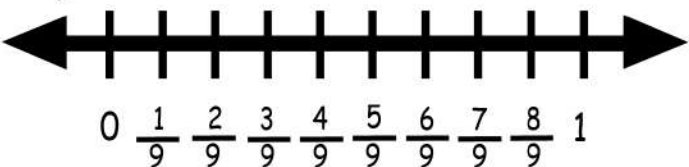
2. $\frac{1}{2} = ?$



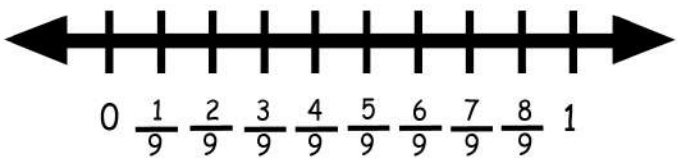
6. $\frac{5}{8} = ?$



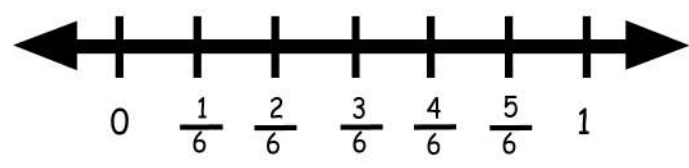
3. $\frac{4}{9} = ?$



7. $\frac{7}{9} = ?$



4. $\frac{2}{6} = ?$



8. $\frac{8}{9} = ?$

