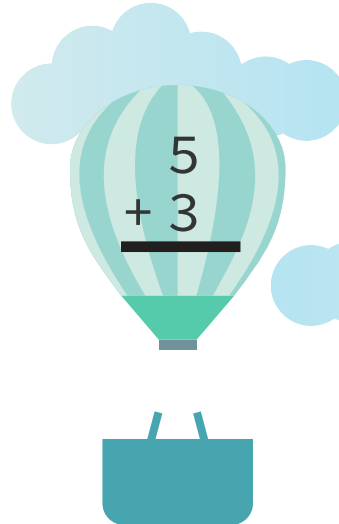





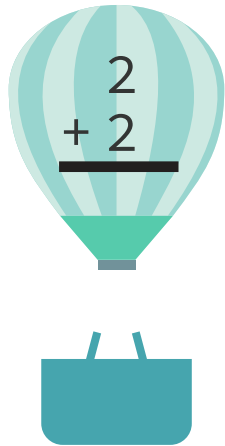
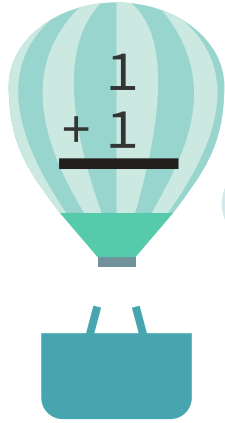
Do the Following Additions



Word Problem:

There were 5 hot air balloons in the sky. If 4 more balloons flew there by air, how many balloons were there in total?

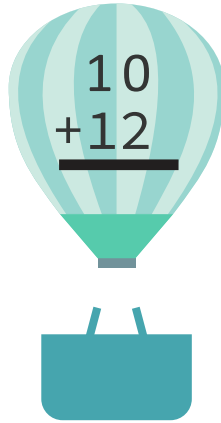
Do the Following Additions



Word Problem:

There were 3 hot air balloons in the sky. If 2 more balloons flew there by air, how many balloons were there in total?

Do the Following Additions




10
+ 12



11
+ 14



20
+ 21

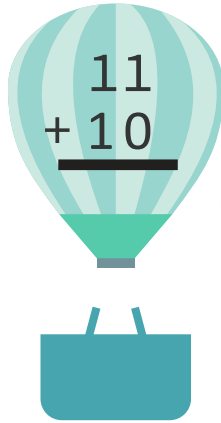


16
+ 22

Word Problem:

There were 13 hot air balloons in the sky. If 10 more balloons flew there by air, how many balloons were there in total?

Do the Following Additions




11
+ 10



10
+ 17



15
+ 25



26
+ 22

Word Problem:

There were 20 hot air balloons in the sky. If 12 more balloons flew there by air, how many balloons were there in total?