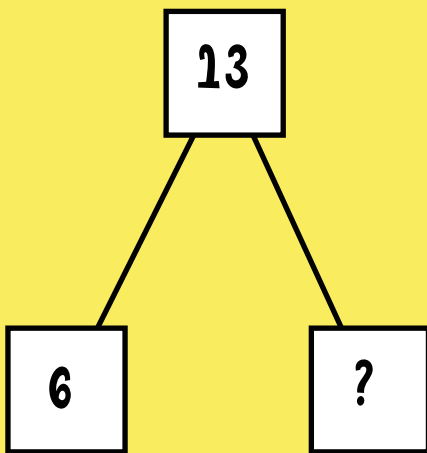
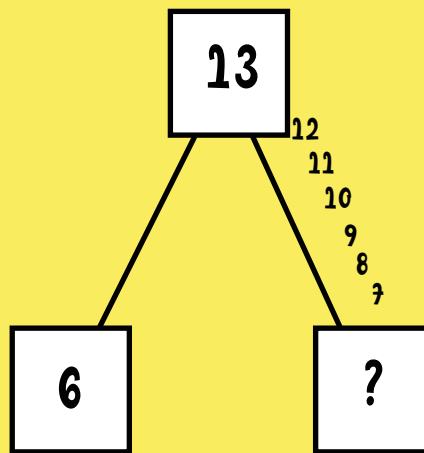


How Numbers Bond!

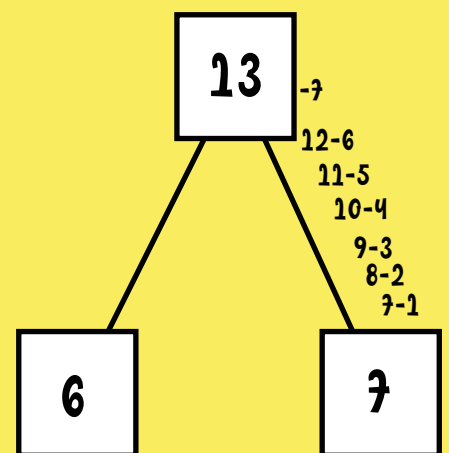
Your drawing teacher Miss Rachel has given you the task to draw 13 birds as an assignment. Till last night you have drawn 6 birds. How many birds do you need to draw more to complete the assignment?



Draw a math mountain and show the relation



Start to count after the given addend to reach the top.



Count how many steps you have passed to reach the top.

So, 7 more birds need to be drawn.

