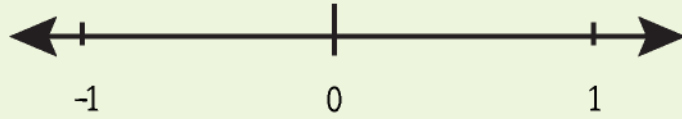


Name : _____

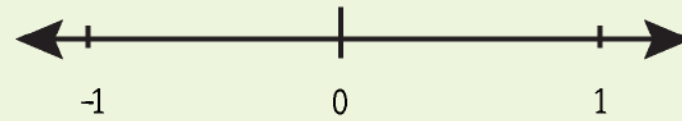


Plotting Rational Numbers between +1 and -1 on a Number Line

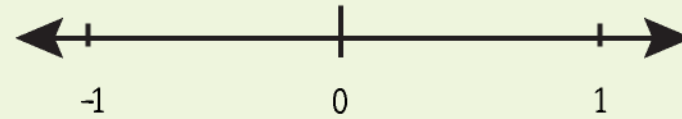
a) Plot $\frac{1}{5}$



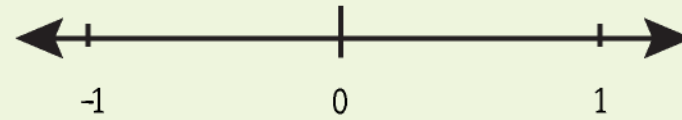
b) Plot $\frac{1}{4}$



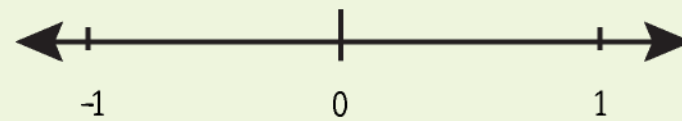
c) Plot $\frac{2}{5}$



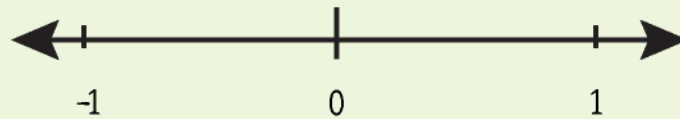
d) Plot $\frac{3}{7}$



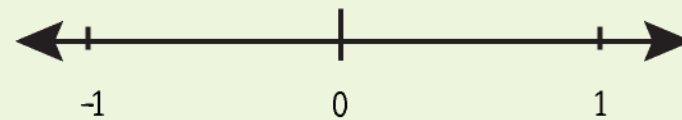
e) Plot $\frac{3}{8}$



f) Plot $\frac{4}{7}$



g) Plot $\frac{1}{8}$



Name : _____



Plotting Rational Numbers between +1 and -1 on a Number Line

