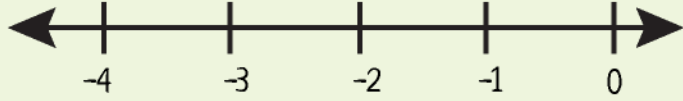


Name : _____

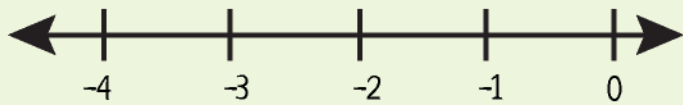


Plotting Rational Numbers Less than -1 on a Number Line

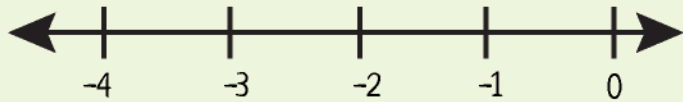
a) Plot $-\frac{9}{5}$



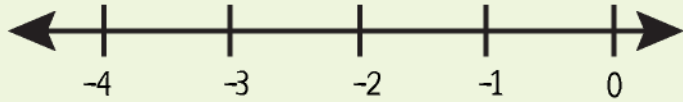
b) Plot $-\frac{3}{2}$



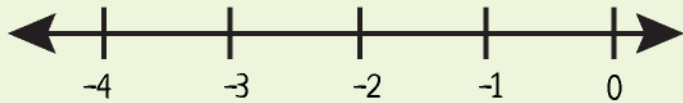
c) Plot $-\frac{4}{3}$



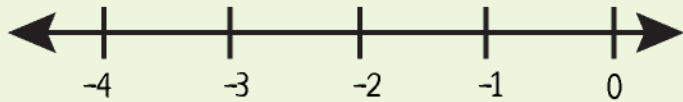
d) Plot $-\frac{5}{4}$



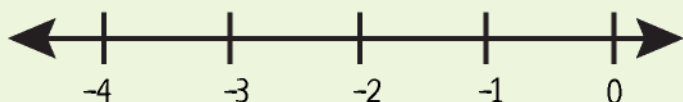
e) Plot $-\frac{6}{5}$



f) Plot $-\frac{7}{5}$



g) Plot $-\frac{8}{3}$

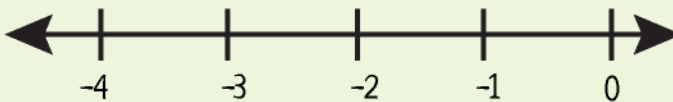


Name : _____

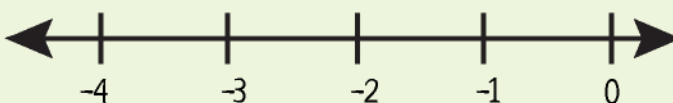


Plotting Rational Numbers Less than -1 on a Number Line

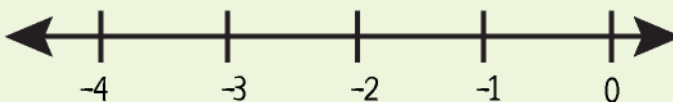
a) Plot $-\frac{9}{5}$



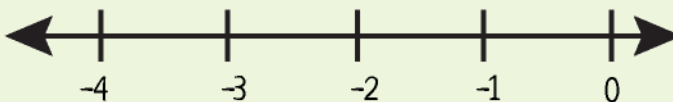
b) Plot $-\frac{3}{2}$



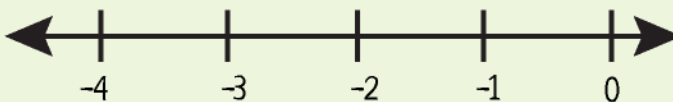
c) Plot $-\frac{4}{3}$



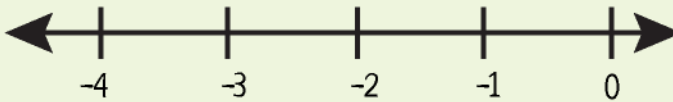
d) Plot $-\frac{5}{4}$



e) Plot $-\frac{6}{5}$



f) Plot $-\frac{7}{5}$



g) Plot $-\frac{8}{3}$

