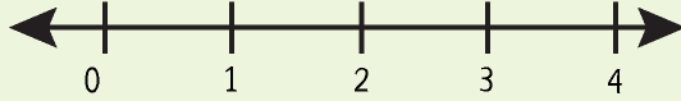


Name : _____

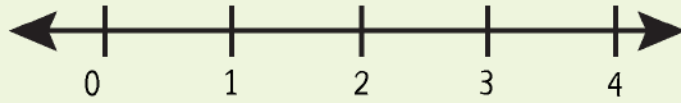


Plotting Mixed Numbers on a Number Line

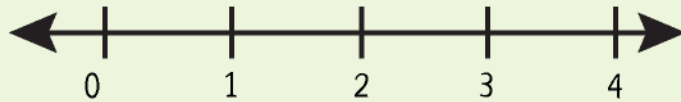
a) Plot $1\frac{1}{5}$



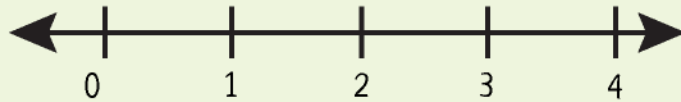
b) Plot $3\frac{1}{2}$



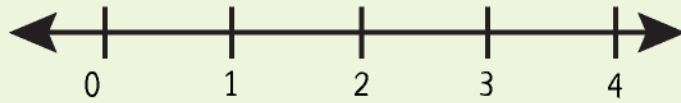
c) Plot $2\frac{2}{3}$



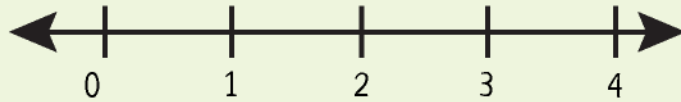
d) Plot $1\frac{3}{4}$



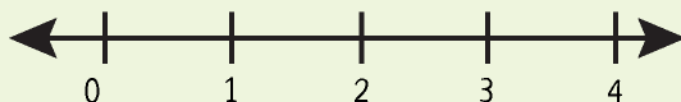
e) Plot $1\frac{3}{5}$



f) Plot $3\frac{3}{5}$



g) Plot $4\frac{2}{3}$

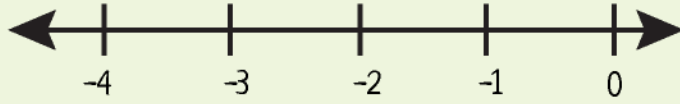


Name : _____

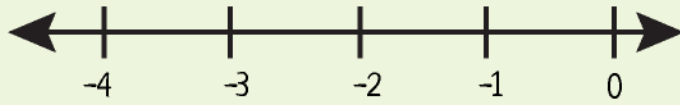


Plotting Mixed Numbers on a Number Line

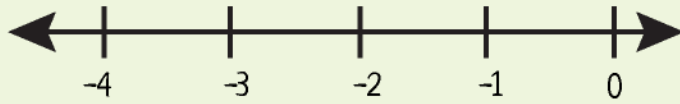
a) Plot $-2\frac{2}{5}$



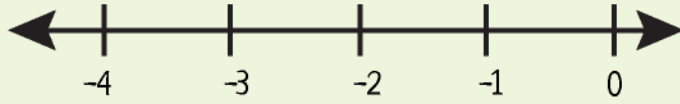
b) Plot $-1\frac{1}{4}$



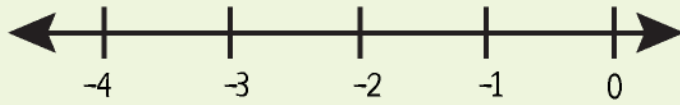
c) Plot $3\frac{2}{3}$



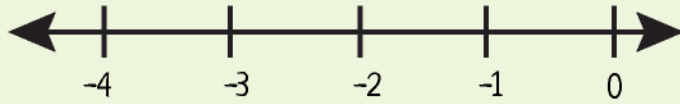
d) Plot $-2\frac{3}{4}$



e) Plot $-2\frac{1}{5}$



f) Plot $-2\frac{1}{5}$



g) Plot $-3\frac{1}{3}$

