


Name : _____


Worksheet for Plotting More than One Rational Number on the same Number Line




a) Plot $5/2, 2/3$




b) Plot $1/2, 3/2$




c) Plot $7/2, 5/2$




d) Plot $5/3, 7/4$





e) Plot $13/4, 9/4$



f) Plot $5/3, 8/3$



g) Plot $3/2, 9/2$



Name : _____



Worksheet for Plotting More than One Rational Number on the same Number Line

