

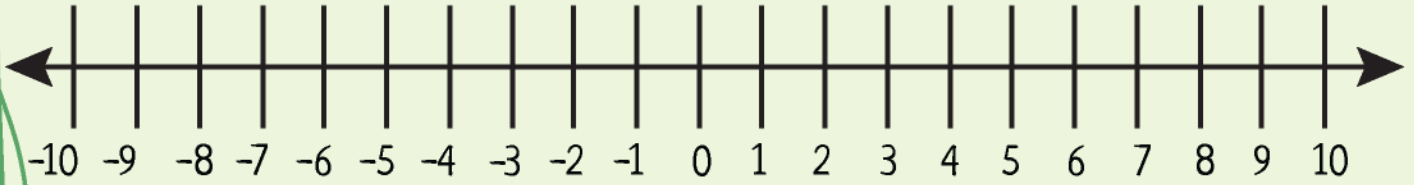
Name : _____



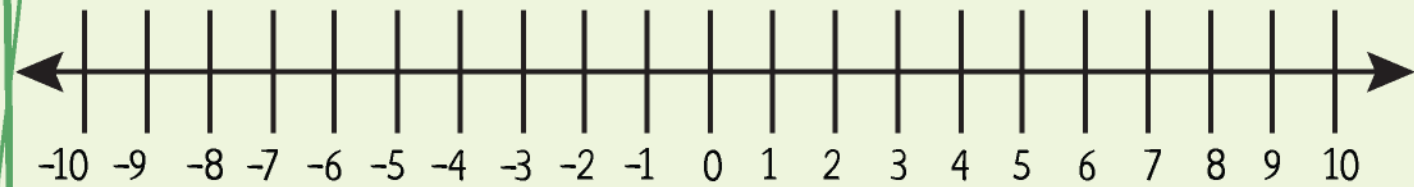
Ordering and Comparing Rational Numbers and Plotting Them on Number Line



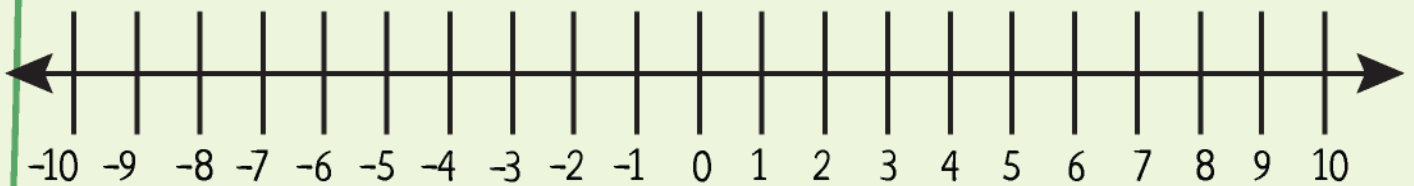
$-\frac{1}{8}$	$\frac{5}{9}$	$\frac{7}{8}$	$-\frac{8}{3}$	$\frac{9}{2}$
----------------	---------------	---------------	----------------	---------------



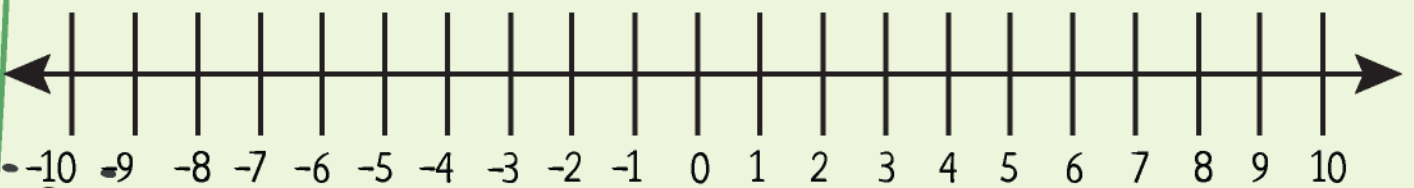
$-\frac{2}{5}$	$\frac{5}{7}$	$\frac{7}{3}$	$-\frac{2}{3}$	$\frac{1}{2}$
----------------	---------------	---------------	----------------	---------------



$-\frac{2}{7}$	$\frac{9}{4}$	$\frac{2}{9}$	$-\frac{5}{9}$	$\frac{3}{7}$
----------------	---------------	---------------	----------------	---------------



$-\frac{11}{8}$	$\frac{2}{7}$	$\frac{5}{4}$	$-\frac{6}{5}$	$\frac{2}{7}$
-----------------	---------------	---------------	----------------	---------------



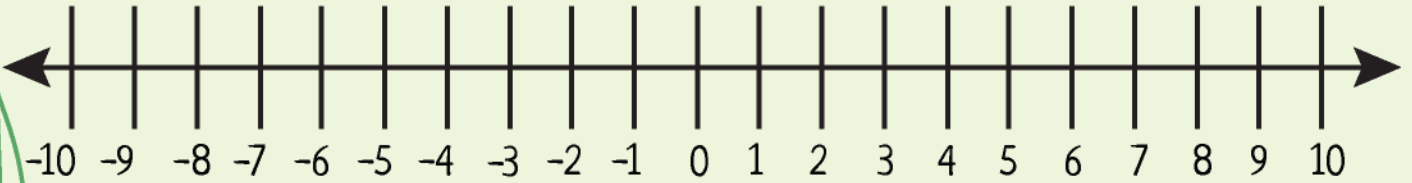
Name : _____



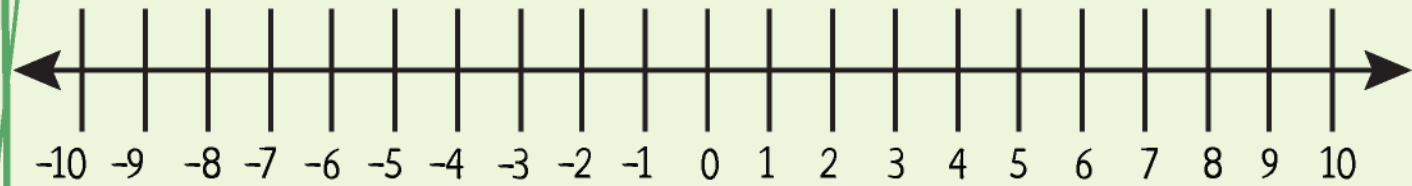
Ordering and Comparing Rational Numbers and Plotting Them on Number Line



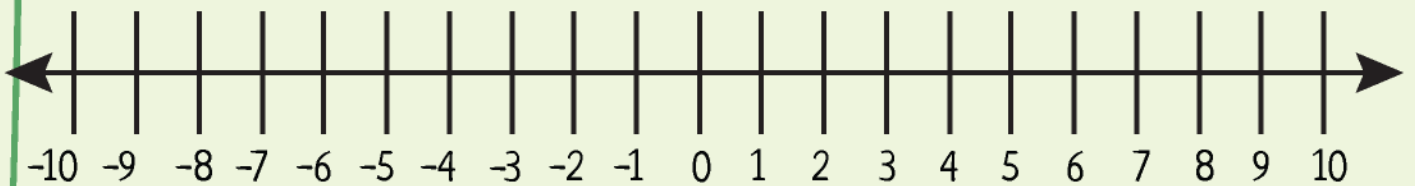
$\frac{9}{2}$	$-\frac{3}{4}$	$-\frac{2}{3}$	$1\frac{5}{8}$	$\frac{4}{5}$
---------------	----------------	----------------	----------------	---------------



$-\frac{2}{5}$	$2\frac{4}{7}$	$\frac{4}{3}$	$-\frac{2}{3}$	$\frac{9}{2}$
----------------	----------------	---------------	----------------	---------------



$-\frac{2}{9}$	$\frac{9}{4}$	$\frac{2}{9}$	$-\frac{5}{6}$	$\frac{3}{8}$
----------------	---------------	---------------	----------------	---------------



$-\frac{11}{6}$	$1\frac{4}{7}$	$2\frac{4}{5}$	$-\frac{8}{5}$	$\frac{3}{7}$
-----------------	----------------	----------------	----------------	---------------

