
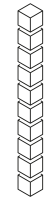


Worksheet for 3 Digit Subtraction with Ten Blocks without Regrouping



= 100

1 Flat



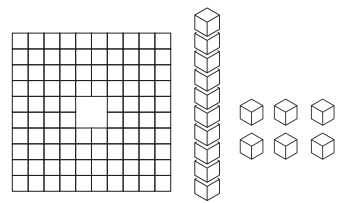
= 10

1 Long

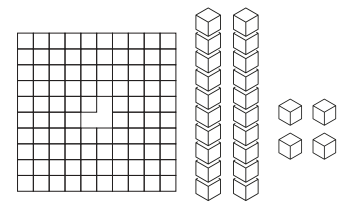


= 01

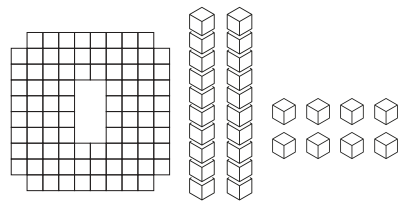
1 Cube



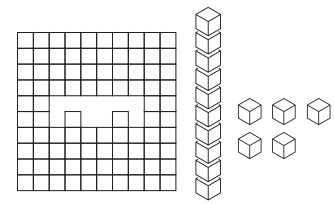
$$116 - 04 = 112$$



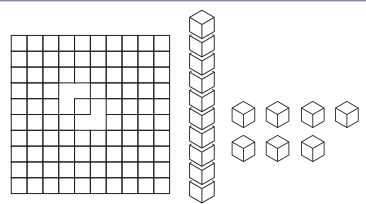
$$\square - \square = \square$$



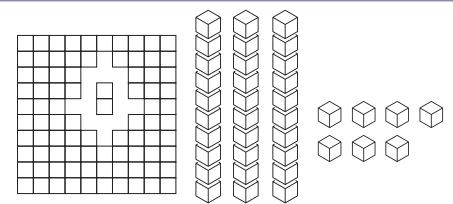
$$\square - \square = \square$$



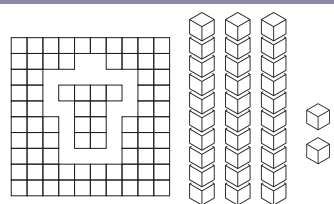
$$\square - \square = \square$$



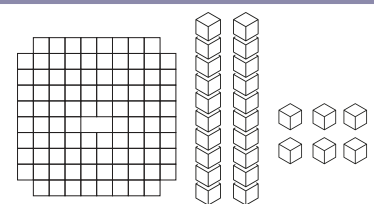
$$\square - \square = \square$$



$$\square - \square = \square$$

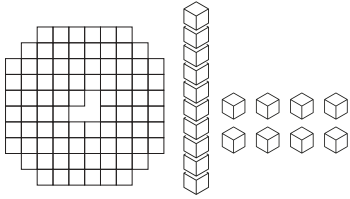


$$\square - \square = \square$$

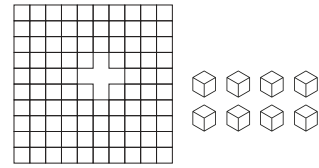


$$\square - \square = \square$$

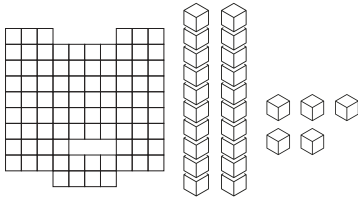
Name: _____



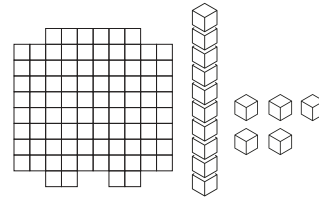
$$\square - \square = \square$$



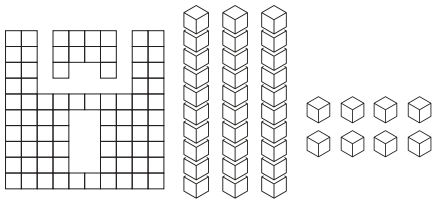
$$\square - \square = \square$$




$$\square - \square = \square$$



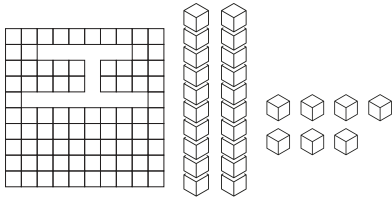
$$\square - \square = \square$$



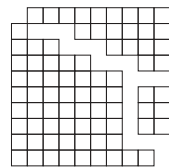
$$\square - \square = \square$$



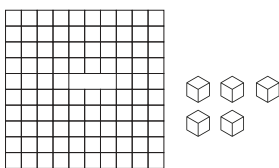
$$\square - \square = \square$$



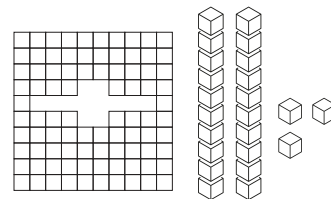
$$\square - \square = \square$$



$$\square - \square = \square$$



$$\square - \square = \square$$



$$\square - \square = \square$$