

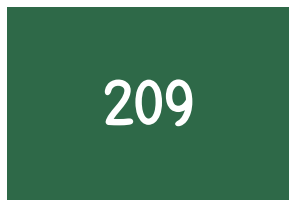


Find the Multiplication of the Circles



Find the Multiplication of the Trapezoids



Decode the numbers and then multiply the numbers

1	2	3	4	5	6	7	8	9
●	⊞	^	∨	⊖		←	▲	⊠

1. Code Numbers:

∨	⊖	←
X	⊠	

Solution:

4	5	7
x	9	

2. Code Numbers:

→	←	▲
X	●	

3. Code Numbers:

^	∨	⊞
X	▲	

4. Code Numbers:

⊖	●	⊠
X	∨	

5. Code Numbers:

▲	∨	^
X	⊞	

