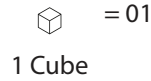
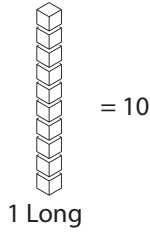


Worksheet for Subtraction with Ten Blocks with Regrouping



$47 - 18 = 29$

$\square - \square = \square$

$\square - \square = \square$

$\square - \square = \square$

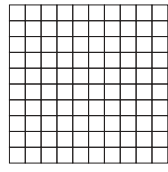
$\square - \square = \square$

$\square - \square = \square$

$\square - \square = \square$

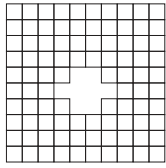
$\square - \square = \square$

Name: _____

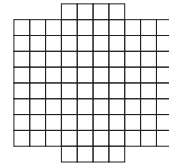


= 100

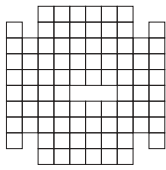
1 Flat



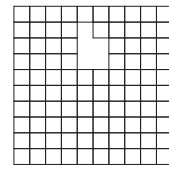
$$100 - 08 = 92$$



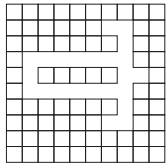
$$\square - \square = \square$$



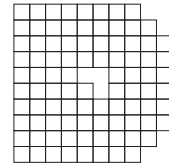
$$\square - \square = \square$$



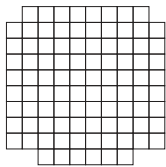
$$\square - \square = \square$$



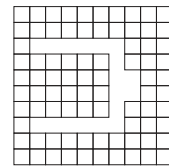
$$\square - \square = \square$$




$$\square - \square = \square$$




$$\square - \square = \square$$



$$\square - \square = \square$$



$$\square - \square = \square$$



$$\square - \square = \square$$