





Block Addition

1.





$$36 + 8 = 44$$

5.




$$__ + __ = __$$

2.





$$__ + __ = __$$

6.




$$__ + __ = __$$

3.





$$__ + __ = __$$

7.





$$__ + __ = __$$

4.



$$__ + __ = __$$

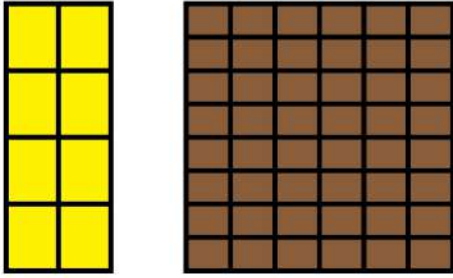
8.



$$__ + __ = __$$

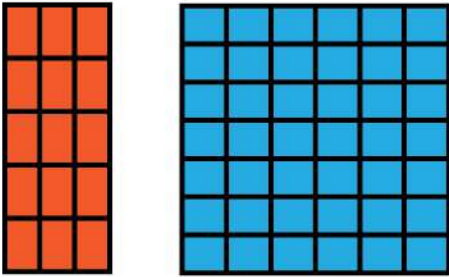


9.




$$\underline{\quad} + \underline{\quad} = \underline{\quad}$$

10.



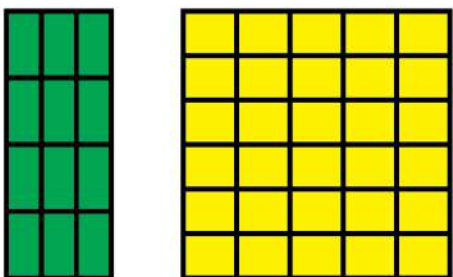
$$\underline{\quad} + \underline{\quad} = \underline{\quad}$$

11.



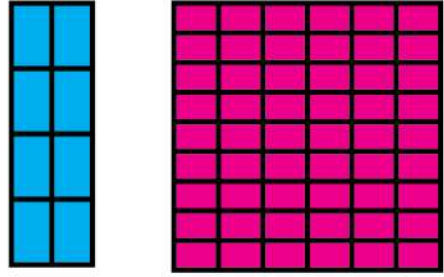
$$\underline{\quad} + \underline{\quad} = \underline{\quad}$$

12.




$$\underline{\quad} + \underline{\quad} = \underline{\quad}$$

13.



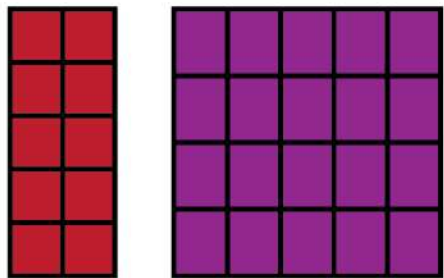
$$\underline{\quad} + \underline{\quad} = \underline{\quad}$$

14.




$$\underline{\quad} + \underline{\quad} = \underline{\quad}$$

15.



$$\underline{\quad} + \underline{\quad} = \underline{\quad}$$

16.



$$\underline{\quad} + \underline{\quad} = \underline{\quad}$$