

Farm Activity


Problem 1 : I have 30 balls. I want to divide them equally to my 3 cats . How can I divide the balls equally?

Answer :




Problem 2 : The cost of 4 parrots is 24\$. Find the cost each parrot?

Answer :




Problem 3 : The price of 6 fish is 48\$. Find the price of each fish.

Answer :




Problem 4 : I have 9 ducks. They give 18 eggs in a day. Find the number of eggs of each ducks.

Answer : _____



Problem 5 : The 7 chickens give 56 eggs. Find the number of eggs of each chicken?

Answer : _____



Problem 6 : I have bought 8 boxes of bones for my dog. There are 32 bones in 8 boxes. How many bones contain in each box?

Answer : _____



Problem 7 : My cats love milk. I have bought 50L of milk for my 5 cats. How can I divide the milk equally for them?

Answer : _____



Problem 8 : I have bought 3 mango trees at 36\$ for my farm.

How much each tree cost?

Answer : _____



Problem 9 : 2 Rabbits cost at 20\$. Find the cost of each rabbit?

Answer : _____

