

Picnic


Problem 1 : If 10 people are going for a picnic. How can they divide 400 cakes equally between them?

Answer :




Problem 2 : 15 people make 300 sandwiches for them. How can they divide sandwiches equally between them?

Answer :




Problem 3 : 12 people scored 108 runs in a cricket game. How many runs did each people score?

Answer :




Problem 4 : The total cost of 13 movie tickets is 117\$. How much does each cost?

Answer : _____



Problem 5 : If the price of 8 kg of tomatoes is 228 \$. Find the price of each kg?

Answer : _____




Problem 6 : We have bought 2 packets of UNO cards for playing in the picnicat cost 100\$. Find the price of each packet?

Answer : _____



Problem 7 : A bus can hold 108 passengers. If there are 9 rows of seats on the bus, how many seats are in each row?

Answer :



Problem 8 : How can we divide 336 chocolates between 8 children?

Answer :



Problem 9 : We will buy 500 bananas for 5 elephants. How can we divide the bananas between them?

Answer :

